

# PROCEDURAL

## 2EP18

First name \_\_\_\_\_

Last name \_\_\_\_\_

School \_\_\_\_\_

Class \_\_\_\_\_

Date of birth

Date of test

Total score  (maximum 28)



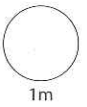
165057










Llywodraeth Cymru  
Welsh Government

1 Count on in **tens**.

59 → 69 →  →  →

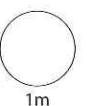


2

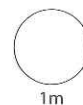


How many apples are there altogether?

apples



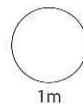
- 3 Write the number that is **2 more** than **98**



- 4 Tess has these coins.



How much does Tess have altogether?

 p

- 5 Write the numbers in order.

48

84

72

83

**smallest**

**largest**

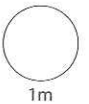


TOTAL



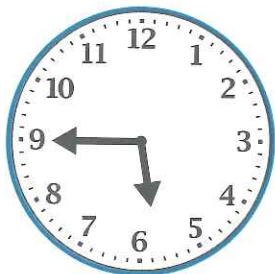
6

Double 9 =

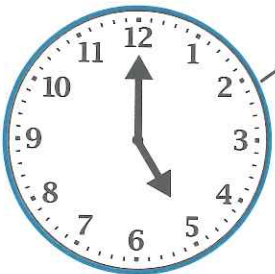


7


Join each clock to the correct time.



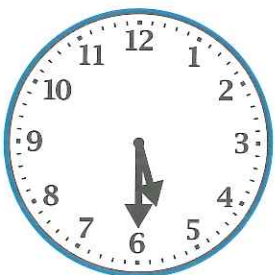
Five o'clock



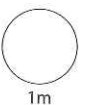
Quarter past five



Half past five

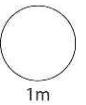


Quarter to six



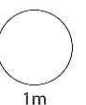
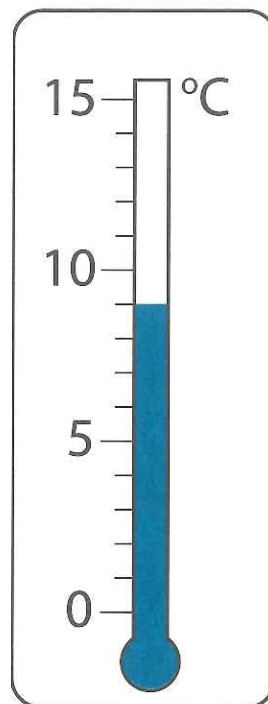
- 8 Use a ruler.

Join the two dots that are 7cm apart.



- 9 What is this temperature?

°C



10

$$50 - 30 =$$



1m

$$7 \times 10 =$$



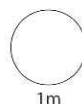
1m

11

5 biscuits in 1 bag



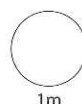
How many biscuits in 4 bags?

 biscuits

1m

Ross needs 35 biscuits.

How many **bags** does he need?

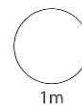
 bags

1m






- 12 Choose two numbers to make this correct.

$$8 + \boxed{\phantom{00}} = 6 + \boxed{\phantom{00}}$$



- 13 Class 2: Favourite sandwiches

cheese	
tuna	
egg	
ham	

Key

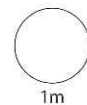
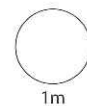
 = 1 child

More children choose tuna than egg.

How many more?

3 children choose ham.

Show this on the chart.



TOTAL

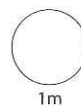


14

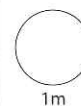

$27 + 8 =$



$57 - 11 =$



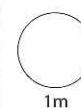
15 What **fraction** of this shape is shaded?



16

$7 + 15 =$

$+ 7$



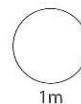


- 17 **Half** of a group of children are girls.

There are 10 girls.

How many **children** are there altogether?

children



18

1 lemon  
25p



1 orange  
40p



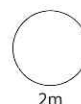
Ash buys 1 lemon and 1 orange.

He pays with £1

How much change does Ash get?



p



TOTAL



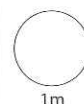
- 19 Mr Evans leaves home at

8 : 15

He gets back a **quarter of an hour** later.







At what time does he get back?

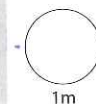
:



- 20 **One** shape is in the wrong place.

Put a cross (x) in it.

Has a right angle	Does <b>not</b> have a right angle
	
	
	



21

Circle the correct answer.

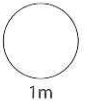
The mouse weighs

20 metres

20 kilograms

20 litres

20 grams



22

Seren has 90p altogether.

She has **two** 20p coins and some 10p coins.

How many 10p coins does she have?



She has

10p coins.

