

National Numeracy Tests

PROCEDURAL

2EP17

First name _____

Last name _____

School _____

Class _____

Date of birth

Date of test

Total score (maximum 28)




150231



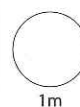
Llywodraeth Cymru
Welsh Government

1



How many books altogether?

books



2

Write in order.

74

46

35

68

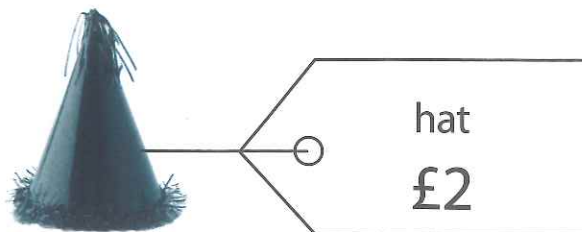


smallest

largest



3



One hat costs £2

How much do 9 hats cost?

£

Elen spends £12 on these hats.

How many hats does she buy?

hats

1m

1m

4

$$73 + 6 =$$

$$58 - 4 =$$

1m

1m

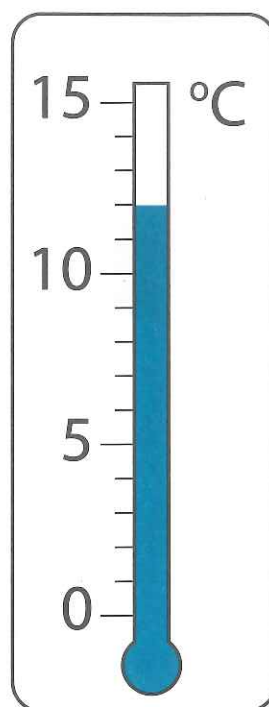
TOTAL

6m

- 5 Look at the thermometer.

What is the temperature?

°C



- 6 Write the missing time.

Four o'clock →

4 : 00

Half past seven →

:



7 The numbers in the circles add up to 70

20 40 50 60 70

Circle two numbers that add up to 80

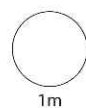
20 40 50 60 70

Now circle two numbers that add up to 100

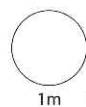
15 45 55 75 95

8

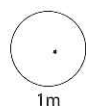
$$17 - 9 =$$



1m



1m



1m



TOTAL

5m

9

Fruit children choose

	girls	boys
banana	10	6
apple	5	9
grapes	7	8
orange	4	3

Use the table.

Which fruit do most **boys** choose?

1m

Altogether how many **children** choose **grapes**?

children

1m

10 Write the missing number in the box.

$$20 - 2 = 11 +$$

1m

11



yogurt
35p



drink
55p

Dev buys one yogurt and one drink.

He pays with a £1 coin.



How much **change** does Dev get?



p

2m

12

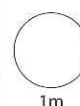
Half of 16 =

1m

TOTAL

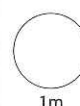
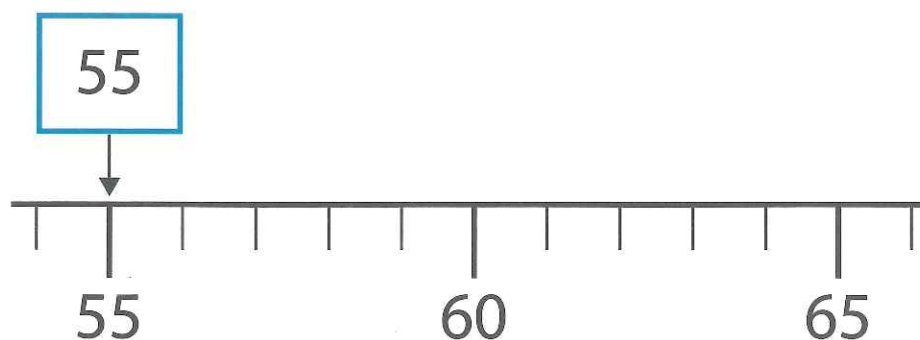
6m

- 13 Use your ruler to measure the length of this line.

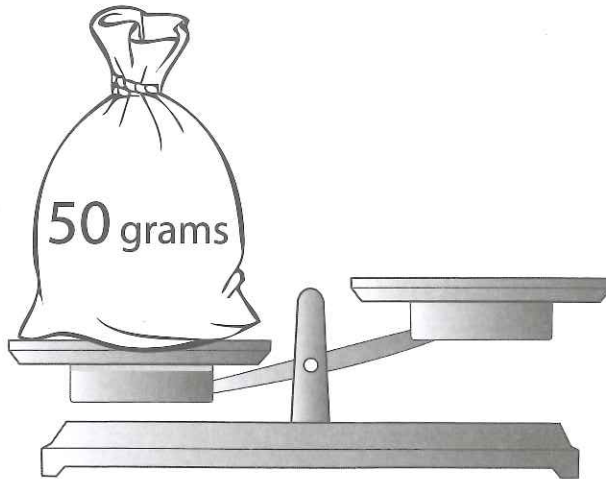


- 14 The arrow points to 55

Draw an arrow (↓) that points to 63



15



Kim wants to balance the scales.

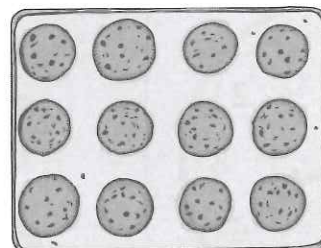
How many 10 gram weights does she need?

weights

1m

16

Tom bakes 12 biscuits.



He eats **one quarter** of them.

How many does he eat?

biscuits

1m

TOTAL

4m

17

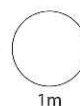


Use two of these signs to make a number sentence.

$$6 \bigcirc 2 \bigcirc 3$$

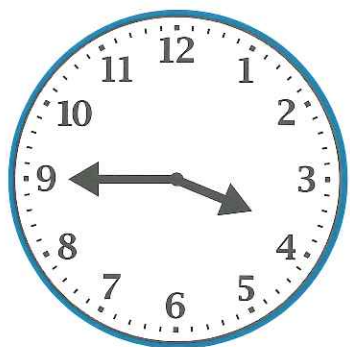
Now use two of the signs to make a **different** number sentence.

$$6 \bigcirc 2 \bigcirc 3$$



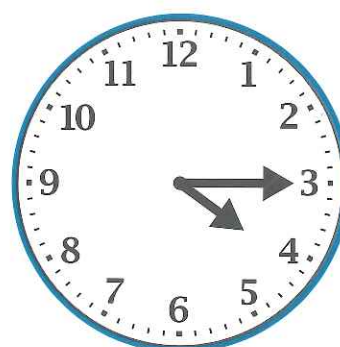
18

Meg leaves school



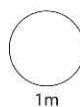
Meg

Meg gets home



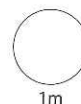
How many **minutes** does Meg take to get home?

minutes



19

Quarter of £1 is

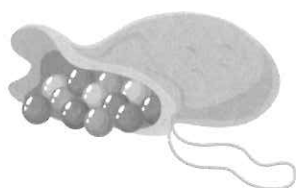
 p


20

$$100 - 60 - 10 =$$

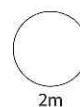


21



5 balls cost 20p.

How much do 15 balls cost?

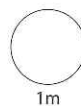
 p


TOTAL



19

Quarter of £1 is

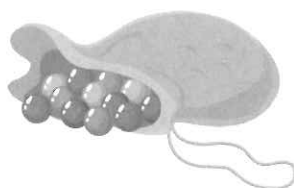
 p


20

$$100 - 60 - 10 =$$


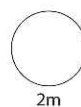


21



5 balls cost 20p.

How much do 15 balls cost?


 p


TOTAL

