


# Food Chains


Fox



Grass



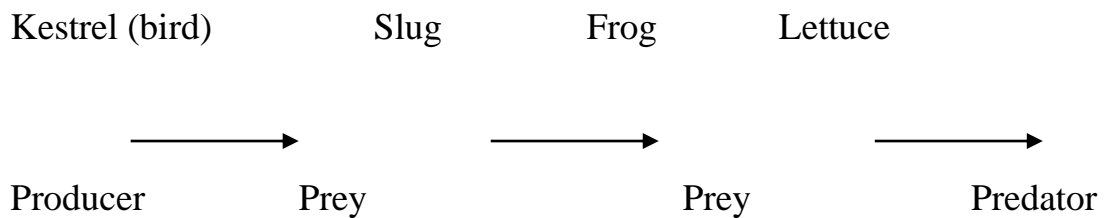
Rabbit



Write these as a food chain



Write this as a food chain.



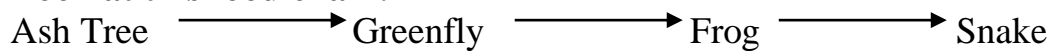
Make two food chains from the list of animals and plants below.

- Cat
- Dead Leaves
- Fox
- Grass
- Worm
- Rabbit
- Blackbird

A)

B)

Look at this food chain:



Label the food chain using **producer, a herbivore and a carnivore.**

2. Why is the sun important for all living things in a food chain?
3. In these pairs of animals decide which the **prey** is and which is the **predator**?

Cats eating a mouse

Fox eating a rabbit

## **Conclusion**

What have you learnt this week?

What does a food chain show?

---

---

What do the direction of the arrows in a food chain mean?

---

What do nearly all food chains start with?

---

---

Name a producer?

---

---

Name a herbivore?

---

---

Name a carnivore?

---

---