

PROCEDURAL

6EP18

First name _____

Last name _____

School _____

Class _____

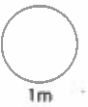
Date of birth ○○ ○○ ○○○○

Date of test ○○ 05 2018


Total score (maximum 35)



1 Subtract 63 from 100



2 Write **thirty thousand** in figures.



3 Write the missing prices.



Was £10.98

Now half price

New price £ _____



Was £ _____

Now half price

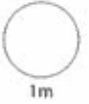
New price £5.75



4 Each week Willow saves £4

How much has she saved after 8 weeks?

£

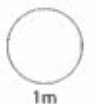


1m

5 The chart shows the ages of a group of children.


Age	Tally
8 years old	
9 years old	
10 years old	
11 years old	
Other	

Altogether, how many children are in the group?



1m

Which age is the **mode**?



1m


TOTAL



7m


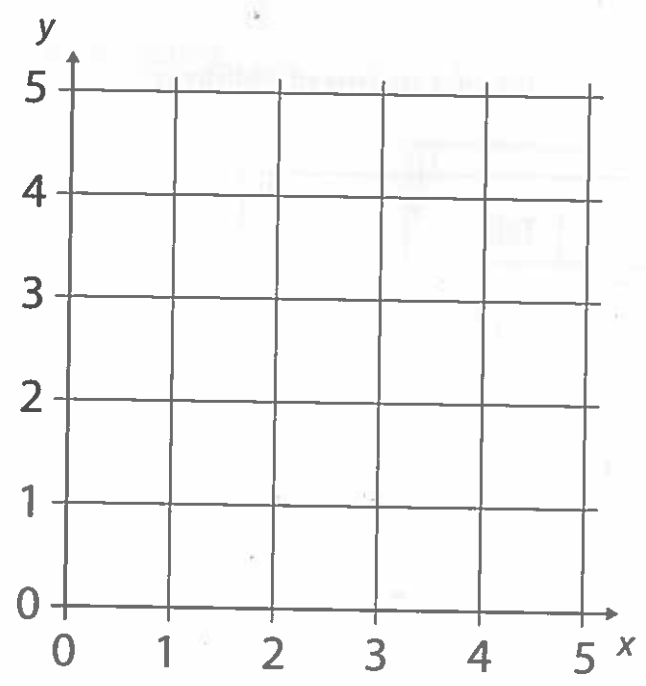
6

8000cm = m



7

Draw a straight line from (0, 0) to (2, 4)



8

A group of friends paid £15 for sweets to sell at a school fair.

They sell 52 bags of sweets for £1 each.

How much profit do they make?


£



9 Here is Samir's school timetable.

9:00am to 9:30am	Registration and assembly
9:30am to 10:45am	Lesson 1
10:45am to 11:00am	Break
11:00am to 12:15pm	Lesson 2
12:15pm to 1:00pm	Lunch
1:00pm to 2:15pm	Lesson 3
2:15pm to 2:30pm	Break
2:30pm to 3:45pm	Lesson 4

Altogether, how much time does Samir spend in the four lessons?



hours



2m

TOTAL




5m

10 To make biscuits:

Use 150g of butter with 200g of chocolate.



So, use 600g of butter with g of chocolate.



1m

11 The table shows information about Stan's journey.

	Distance	How long he drives for
He drives from Anglesey to Wrexham.	83 miles	1 hour 40 minutes
Then he drives from Wrexham to Cardiff.	178 miles	3 hours 50 minutes

The total distance is miles.



1m

Altogether he drives for hours and minutes.

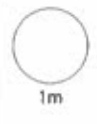


1m


12 Write the next number in each sequence.

0.41 0.57 0.73 0.89

7000 700 70 7




13

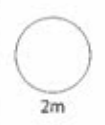
 Party hats 36p each

Mrs Brooks wants 24 party hats.

What is the total cost?



£



 Balloons 90p for a pack of five

Mr Brooks pays £2.70 for packs of balloons.

How many balloons does he get?



14

Temperature in Baghdad, Iraq
50°C

Temperature in Vostok, Antarctica
-80°C

What is the **difference** between these two temperatures?

°C

15

A clock shows

08:45:19
HOURS MINUTES SECONDS

After

seconds

it shows

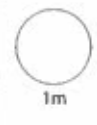
08:46:02
HOURS MINUTES SECONDS

16

25% of 40 =

10% of 70 =

20% of 70 =



17 Y Foel Goch is a mountain in Wales.

Height 805 metres (2641 feet)

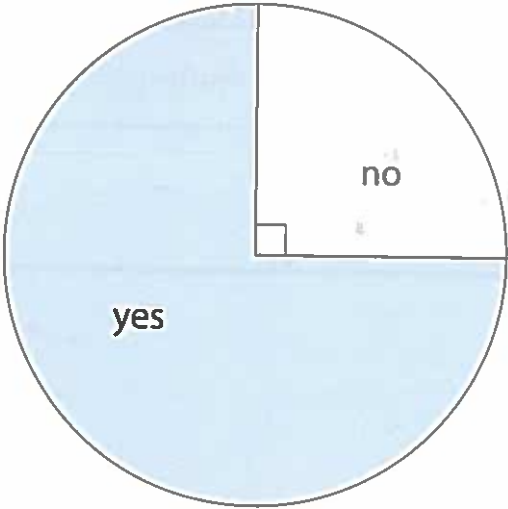
Round its height to the **nearest 10 metres**.

Round its height to the **nearest 100 feet**.



18 People were asked if they have pets.

The pie chart shows the results.



30 people said "no".

How many people said "yes"?



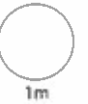
TOTAL



19

$$\frac{3}{8} \text{ of } 48 = \boxed{}$$

$$154 \div 14 = \boxed{}$$



20

Caron plays four games. These are her scores.

	Game 1	Game 2	Game 3	Game 4
Score	34	26	10	?

Caron's **mean** score is 25

Work out her score for game 4





21

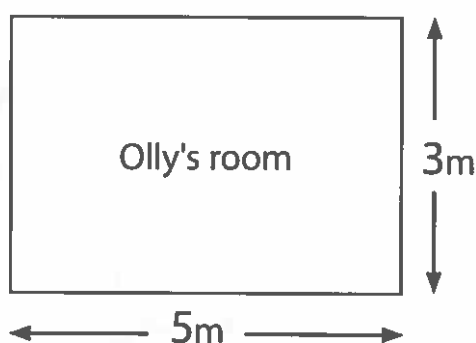
$$15.2 \times 30 =$$



1m

22

Olly buys carpet that fits exactly in his rectangular room with none left over.



One square metre of carpet costs £12

How much does he pay altogether?

£



2m

TOTAL



7m