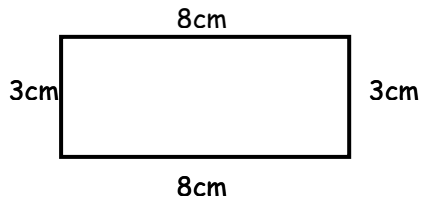
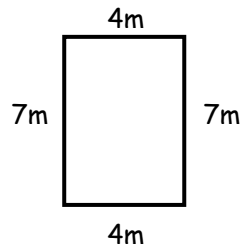


WALT – calculate perimeter.

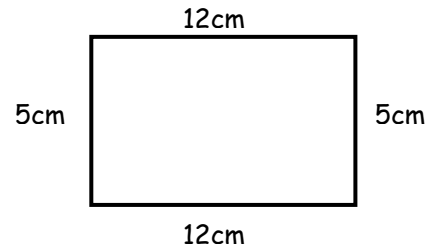
1. Calculate the perimeter's of the following squares and rectangles below: (remember to show the units i.e. mm, cm,)



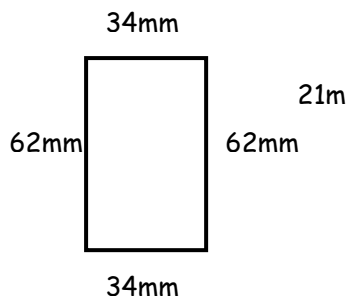
Perimeter =
.....



Perimeter =
.....



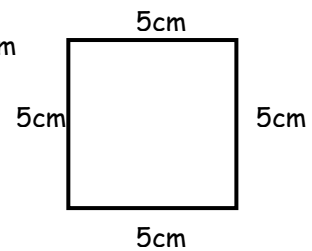
Perimeter =
.....



Perimeter =
.....



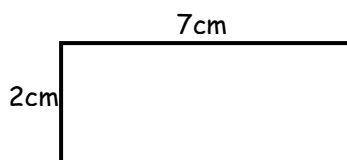
Perimeter =
.....



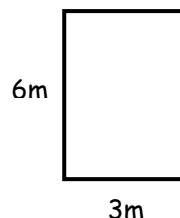
Perimeter =
.....

2. On the worksheet

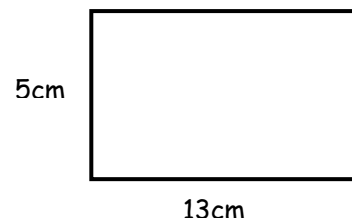
- (i) Note the size of the missing sides
(ii) Calculate the perimeter of the squares and rectangles:
(remember to show the units i.e. mm, cm,)



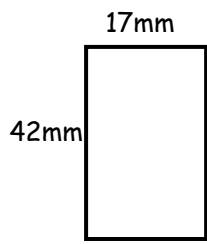
Perimeter =
.....



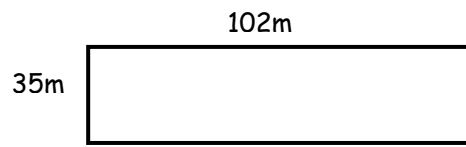
Perimeter =
.....



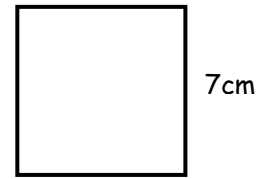
Perimeter =
.....



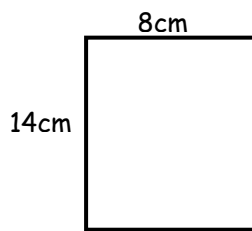
Perimeter =
.....



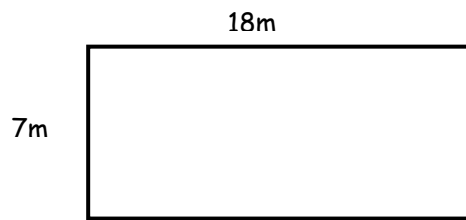
Perimeter =
.....



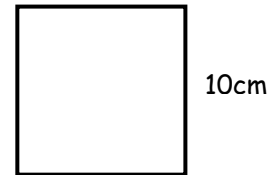
Perimeter =
.....



Perimeter =
.....



Perimeter =
.....



Perimeter =
.....