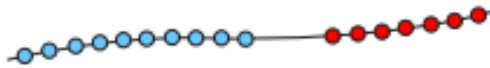


Activity Mat 2a

Section 1

Write a number sentence to show how many beads there are altogether.



Section 2

Draw and colour the next 3 cars in the pattern.



Section 3

If today is Tuesday, what day was it 2 days ago?

Put a circle around the correct day.

Wednesday Sunday Saturday

Section 4

Imagine seeing 3 elephants at the zoo.

How many legs would you see?

Section 5

Draw lines to match the name and the shape.



cube



sphere



triangular prism



cuboid

Section 6

Which jug is half full?
Tick the correct one.



Section 7

Make this clock show quarter past 8.



Section 8

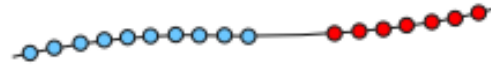
How much money is here?



Activity Mat 2a - Answers

Section 1

Write a number sentence to show how many beads there are altogether.



$$10 + 7 = 17$$

Section 3

If today is Tuesday, what day was it 2 days ago?

Put a circle around the correct day.

Wednesday Sunday Saturday

Section 4

Imagine seeing 3 elephants at the zoo.

How many legs would you see?

12

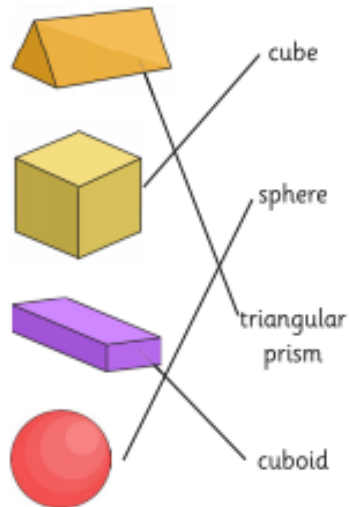
Section 2

Draw and colour the next 3 cars in the pattern.



Section 5

Draw lines to match the name and the shape.



Section 6

Which jug is half full?
Tick the correct one.



Section 7

Make this clock show quarter past 8.



Section 8

How much money is here?



39p

Activity Mat 2b

Section 1

Use the correct sign $<$ or $>$ to make these true:

$$15 \quad \square \quad 20 \quad 13 \quad \square \quad 8$$

Section 2

What are the missing numbers?



Section 3

Billy has 34 football cards. Max has 22 more. How many cards has Max got?



Section 4

Which number is the odd one out?
Explain how you know.

18 26
82 15 74

.....

.....

Section 6

Dance class starts at half past 9. It takes half an hour to get there. What time does Kim need to set off, to get there on time?

Section 7

How much juice is in the jug?



Section 8

Are these correct? If not, can you make them right?

$$12 + 52 = 74$$

$$106 - 13 = 91$$

$$48 - 15 = 33$$

Section 5

Kate eats $\frac{1}{4}$ of a pizza. What fraction of the pizza is left?



Activity Mat 2b - Answers

Section 1

Use the correct sign < or > to make these true:

$$15 < 20 \quad 13 > 8$$

Section 2

What are the missing numbers?

0	5	10	15	20	25	30	35
---	---	----	----	----	----	----	----

Section 3

Billy has 34 football cards. Max has 22 more. How many cards has Max got?



56

Section 4

Which number is the odd one out?
Explain how you know.

18 26
82 15 74

15 because it is an odd number.

Section 6

Dance class starts at half past 9. It takes half an hour to get there. What time does Kim need to set off, to get there on time?

9 o'clock

Section 7

How much juice is in the jug?



35ml

Section 8

Are these correct? If not, can you make them right?

$$12 + 52 = 74$$

No, $12 + 52 = 64$

$$106 - 13 = 91$$

No, $106 - 13 = 93$

$$48 - 15 = 33$$

Yes

Section 5

Kate eats $\frac{1}{4}$ of a pizza. What fraction of the pizza is left?



$\frac{3}{4}$