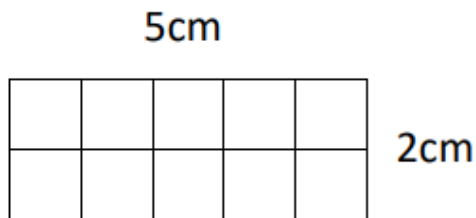


27/01/21

WALT measure the perimeter of rectangles.

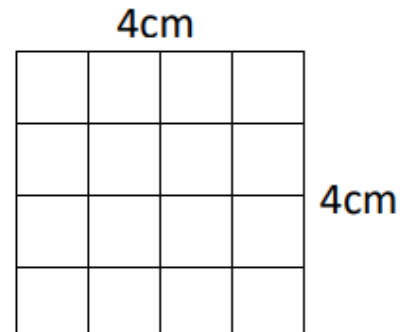
Work out the perimeter of the following rectangles:

1)



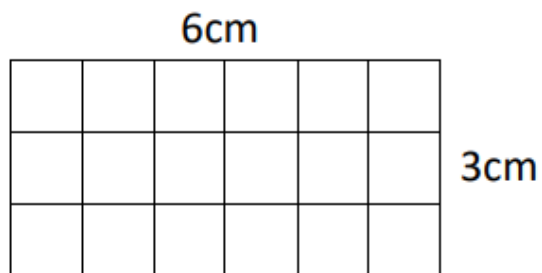
Perimeter = _____ cm

2)



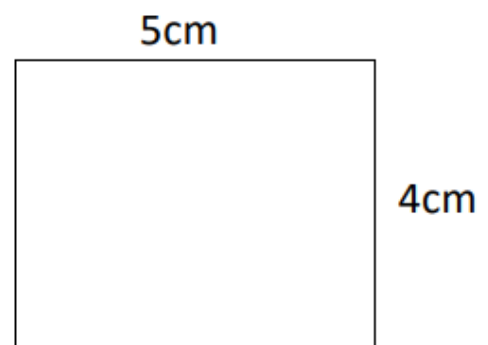
Perimeter = _____ cm

3)



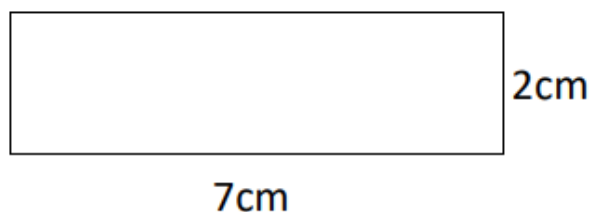
Perimeter = _____ cm

4)



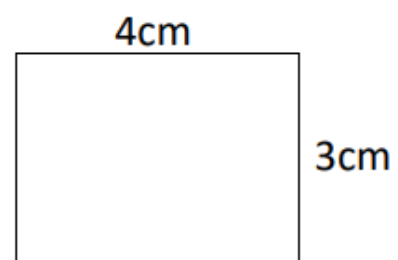
Perimeter = _____ cm

5)



Perimeter = _____ cm

6)



Perimeter = _____ cm

Handy Hint: The formula for the perimeter of a rectangle is:
 $2 \times (\text{length} + \text{width})$