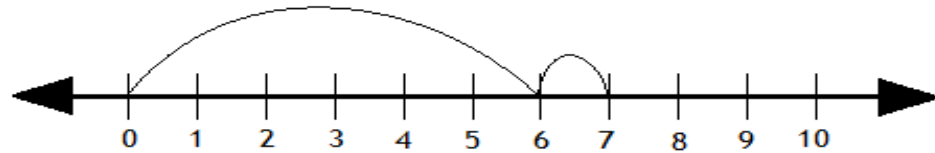


Adding with number lines

Grade 1 Addition Worksheet

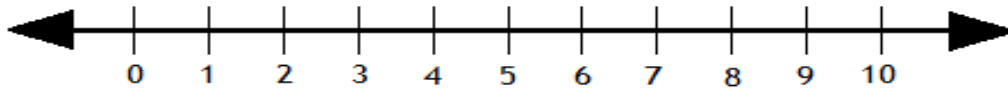
Solve the following by drawing hops on the number line.

Example:



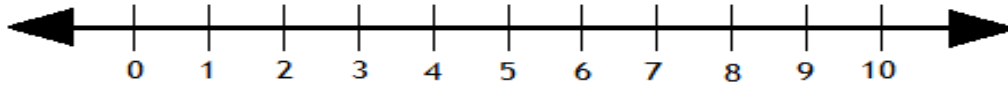
$$6 + 1 = \boxed{7}$$

1.



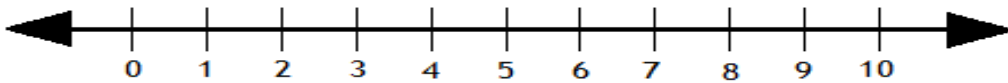
$$1 + 5 = \boxed{}$$

2.



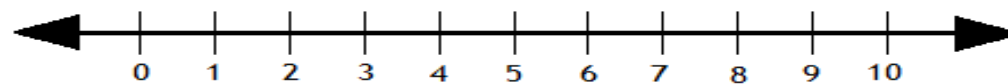
$$2 + 8 = \boxed{}$$

3.



$$1 + 4 = \boxed{}$$

4.



$$2 + 6 = \boxed{}$$

Adding with number lines

Grade 1 Addition Worksheet

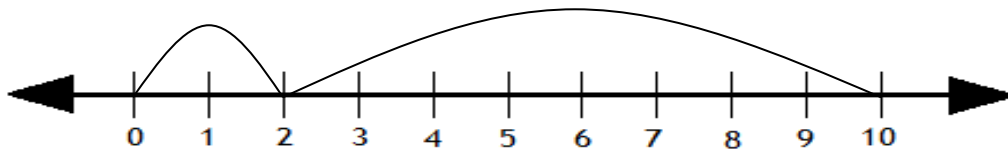
Answers

1.



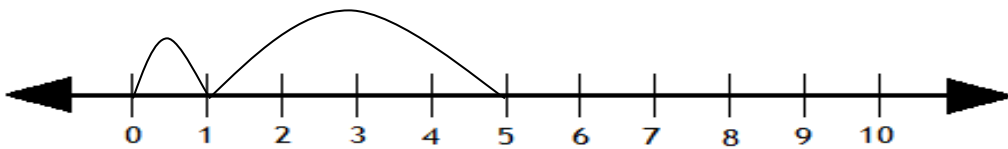
$$1 + 5 = \boxed{6}$$

2.



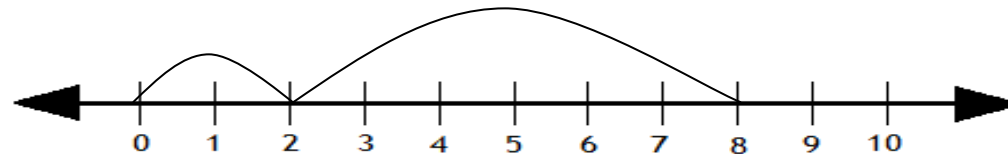
$$2 + 8 = \boxed{10}$$

3.



$$1 + 4 = \boxed{5}$$

4.



$$2 + 6 = \boxed{8}$$