




Doubles to double 5




$$3 + 3 = \square$$



$$2 + 2 = \square$$




$$1 + 1 = \square$$



$$4 + 4 = \square$$



$$2 + \square = 4$$



$$\square + \square = 6$$



$$\square + 2p = 4p$$



$$\square + \square = 10p$$

Look at the pictures and complete the additions.



Use pairs of cube towers to help you.



Use cubes to double numbers bigger than 5. Write the number sentences, e.g. $6 + 6 = \square$

