

Would you rather...?

Christmas Challenge Cards




Would you rather...? Christmas Challenge Cards

1. You need to buy 3 candy canes.

5p



12p



Would you rather buy 3 individual candy canes or a group of candy canes? Explain your reasoning.

Would you rather...? Christmas Challenge Cards

2. You need to buy 6 baubles.

2p



15p



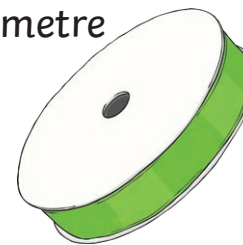
Would you rather buy 6 baubles individually or a group of 6 baubles? Explain your reasoning.

Would you rather...? Christmas Challenge Cards


3. You need to buy 4 metres of ribbon.

20p

1 metre



70p



Would you rather buy 4 x 1 metre rolls of ribbon or a pack of ribbon? Explain your reasoning.


Would you rather...? Christmas Challenge Cards

4. You need to buy 5 mini Christmas trees.

£1



£4



Would you rather buy 5 mini Christmas trees individually or a pack of mini Christmas trees? Explain your reasoning.

twinkl.com

Would you rather...? Christmas Challenge Cards

5. You need to buy 4 Christmas cakes.

10p



35p



Would you rather buy 4 Christmas cakes individually or a box of Christmas cakes? Explain your reasoning.

twinkl.com

Would you rather...? Christmas Challenge Cards

6. You need to buy 6 Christmas cookies.

5p



40p



Would you rather buy 6 Christmas cookies individually or a packet of Christmas cookies? Explain your reasoning.

twinkl.com


Would you rather...? Christmas Challenge Cards

7. You need to buy 5 Christmas crackers.

2p



8p



Would you rather buy 5 Christmas crackers individually or a box of Christmas crackers? Explain your reasoning.

twinkl.com

Would you rather...? Christmas Challenge Cards

8. You need to buy 3 Christmas puddings.

£2



£7



Would you rather buy 3 Christmas puddings individually or a box of Christmas pudding? Explain your reasoning.

twinkl.com

Would you rather...? Christmas Challenge Cards

9. You need to buy 4 Christmas stockings.

20p



£1



Would you rather buy 4 Christmas stockings individually or a bag of Christmas stockings? Explain your reasoning.

twinkl.com

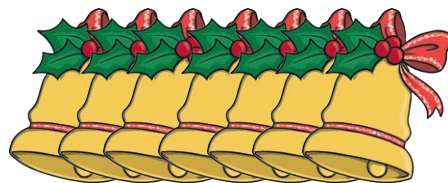
Would you rather...? Christmas Challenge Cards

10. You need to buy 7 Christmas bells.

2p



15p



Would you rather buy 7 Christmas bells individually or a bag of Christmas bells? Explain your reasoning.

twinkl.com