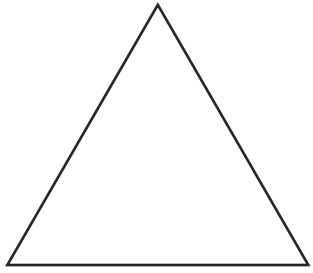



# Investigating Lines of Symmetry



Name \_\_\_\_\_

Sides \_\_\_\_\_

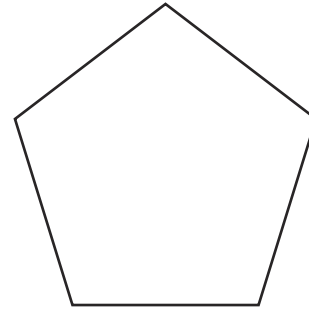
Lines of Symmetry \_\_\_\_\_



Name \_\_\_\_\_

Sides \_\_\_\_\_

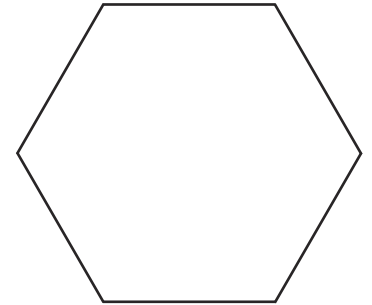
Lines of Symmetry \_\_\_\_\_



Name \_\_\_\_\_

Sides \_\_\_\_\_

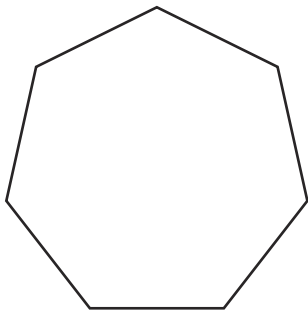
Lines of Symmetry \_\_\_\_\_



Name \_\_\_\_\_

Sides \_\_\_\_\_

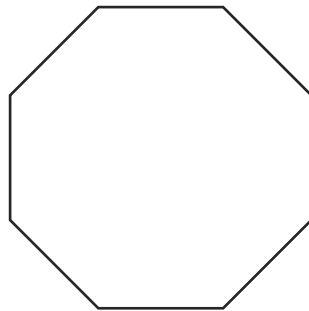
Lines of Symmetry \_\_\_\_\_



Name \_\_\_\_\_

Sides \_\_\_\_\_

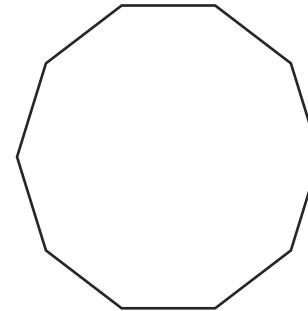
Lines of Symmetry \_\_\_\_\_



Name \_\_\_\_\_

Sides \_\_\_\_\_

Lines of Symmetry \_\_\_\_\_

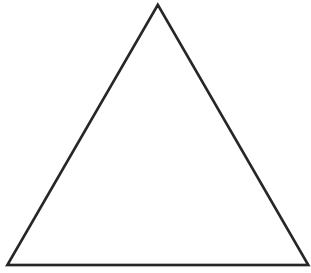


Name \_\_\_\_\_

Sides \_\_\_\_\_

Lines of Symmetry \_\_\_\_\_


# Investigating Lines of Symmetry Answers



Name **triangle (equilateral)**

Sides **3**

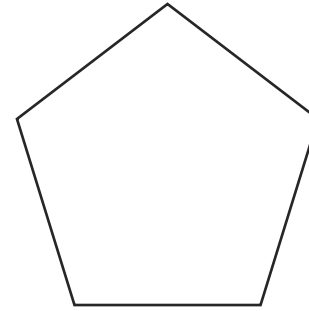
Lines of Symmetry **3**



Name **square**

Sides **4**

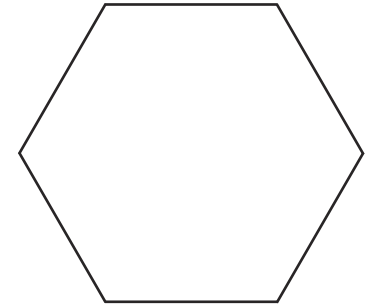
Lines of Symmetry **4**



Name **pentagon**

Sides **5**

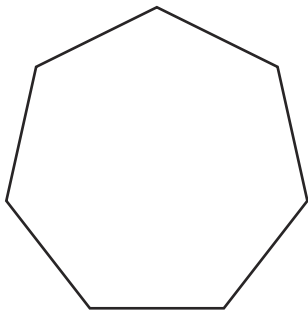
Lines of Symmetry **5**



Name **hexagon**

Sides **6**

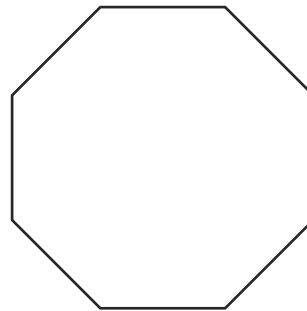
Lines of Symmetry **6**



Name **heptagon**

Sides **7**

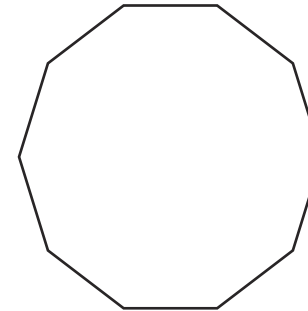
Lines of Symmetry **7**



Name **octagon**

Sides **8**

Lines of Symmetry **8**



Name **decagon**

Sides **10**

Lines of Symmetry **10**