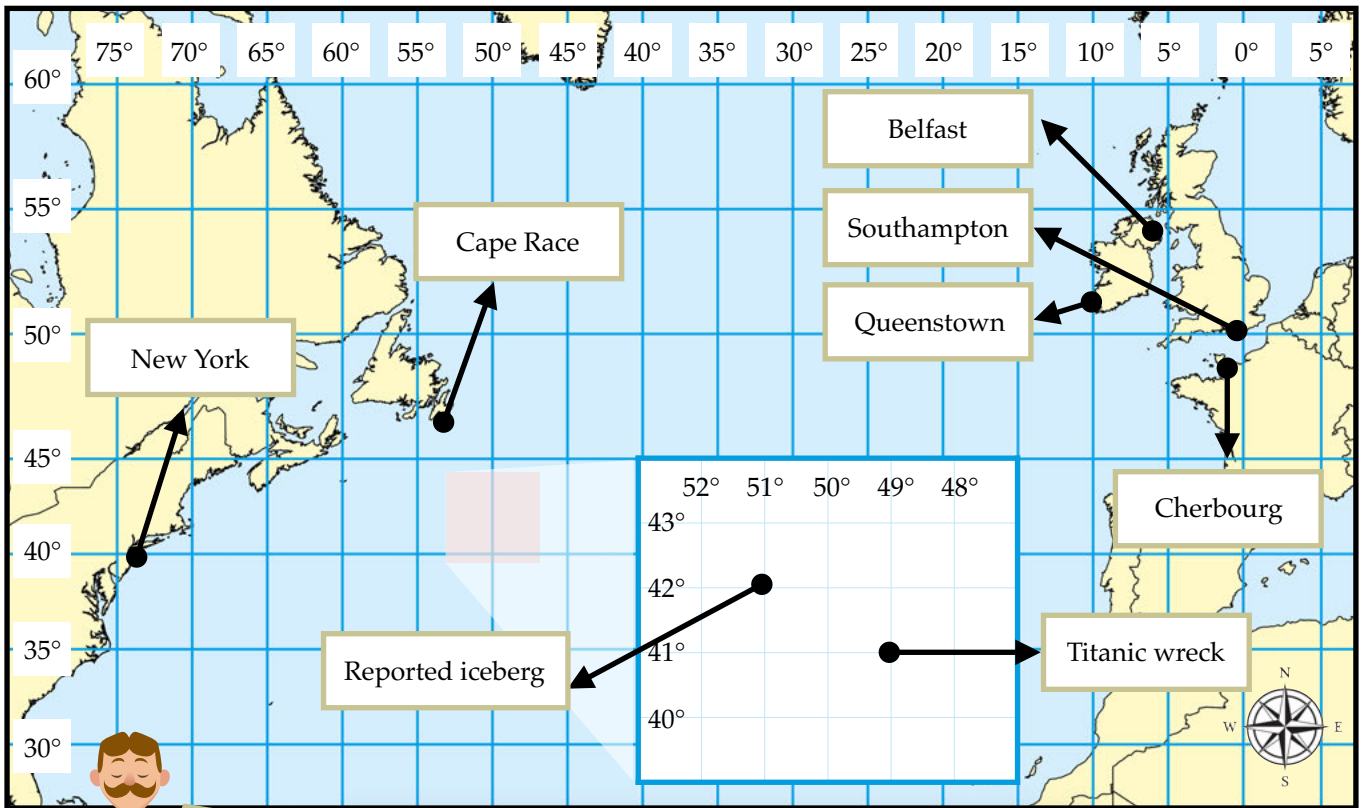


Name: _____

Date: _____



Match the locations to the correct co-ordinates using the map above to help you.

Belfast

Southampton

Cherbourg

Queenstown

Titanic wreck

Reported iceberg

New York

Cape Race

40°N 74°W

50°N 1°W

54°N 6°W

41°N 49°W

42°N 51°W

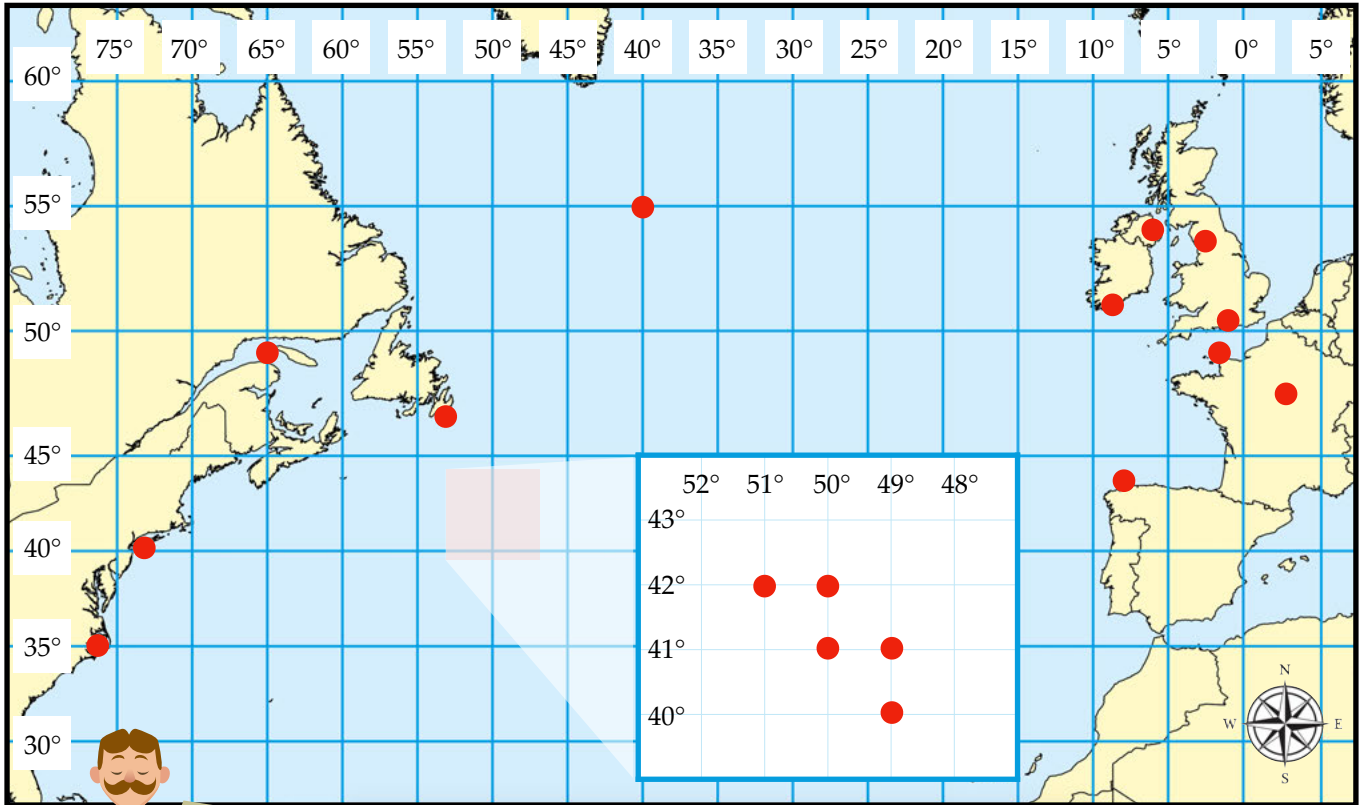
48°N 2°W

47°N 53°W

52°N 9°W

Name: _____

Date: _____



Use the dots on the map to help you find and label locations which are linked to the Titanic. Some dots are not linked to an important location. Put a cross through any of these dots.

Belfast - 54°N 6°W

Southampton - 50°N 1°W

Cherbourg - 48°N 2°W

Queenstown - 52°N 9°W

Titanic wreck - 41°N 49°W

New York - 40°N 74°W

Cape Race - 47°N 53°W

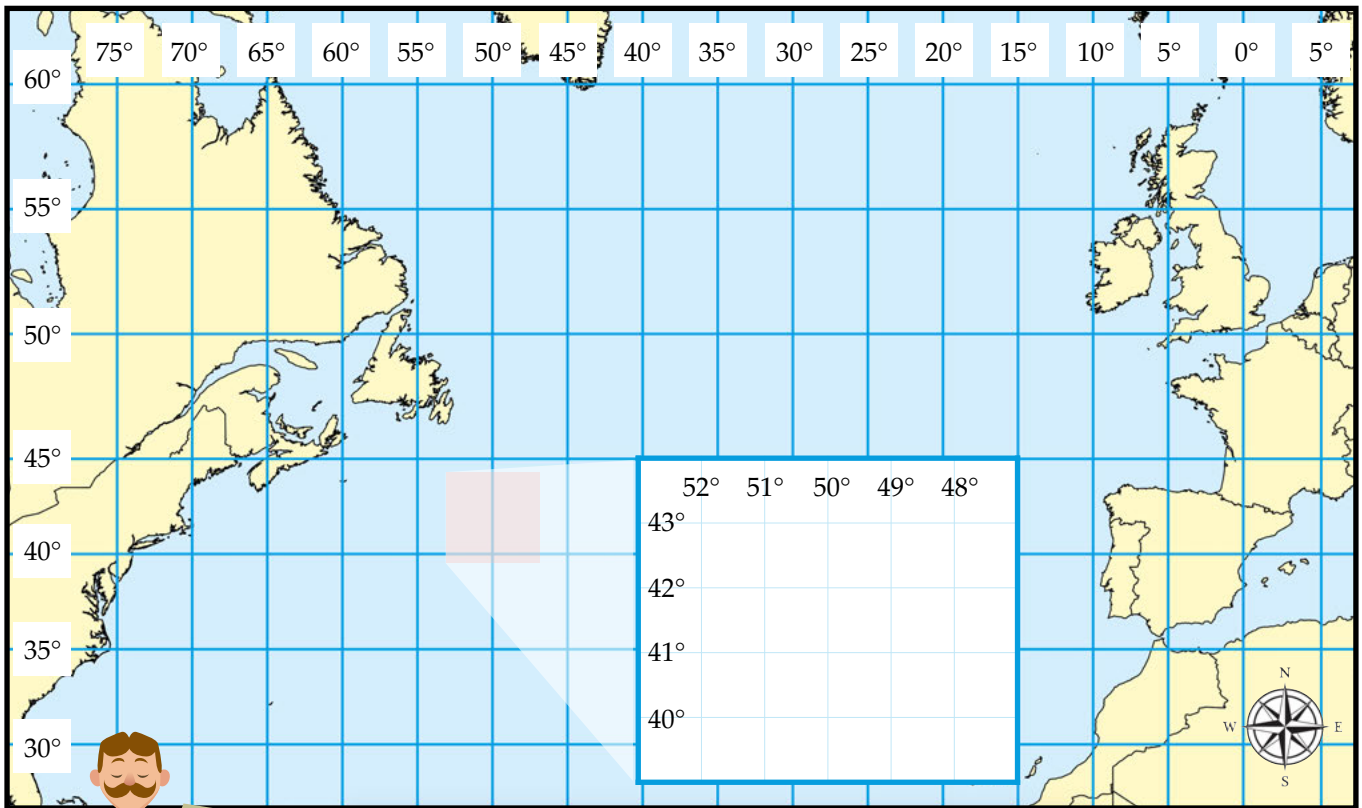
Iceberg 1 - 41°N 50°W

Iceberg 2 - 42°N 50°W

Iceberg 3 - 42°N 51°W

Name: _____

Date: _____



Find these locations significant to the Titanic on the map above. Label each location as you find it.

Belfast - 54°N 6°W

Southampton - 50°N 1°W

Cherbourg - 48°N 2°W

Queenstown - 52°N 9°W

Titanic wreck - 41°N 49°W

New York - 40°N 74°W

Cape Race - 47°N 53°W

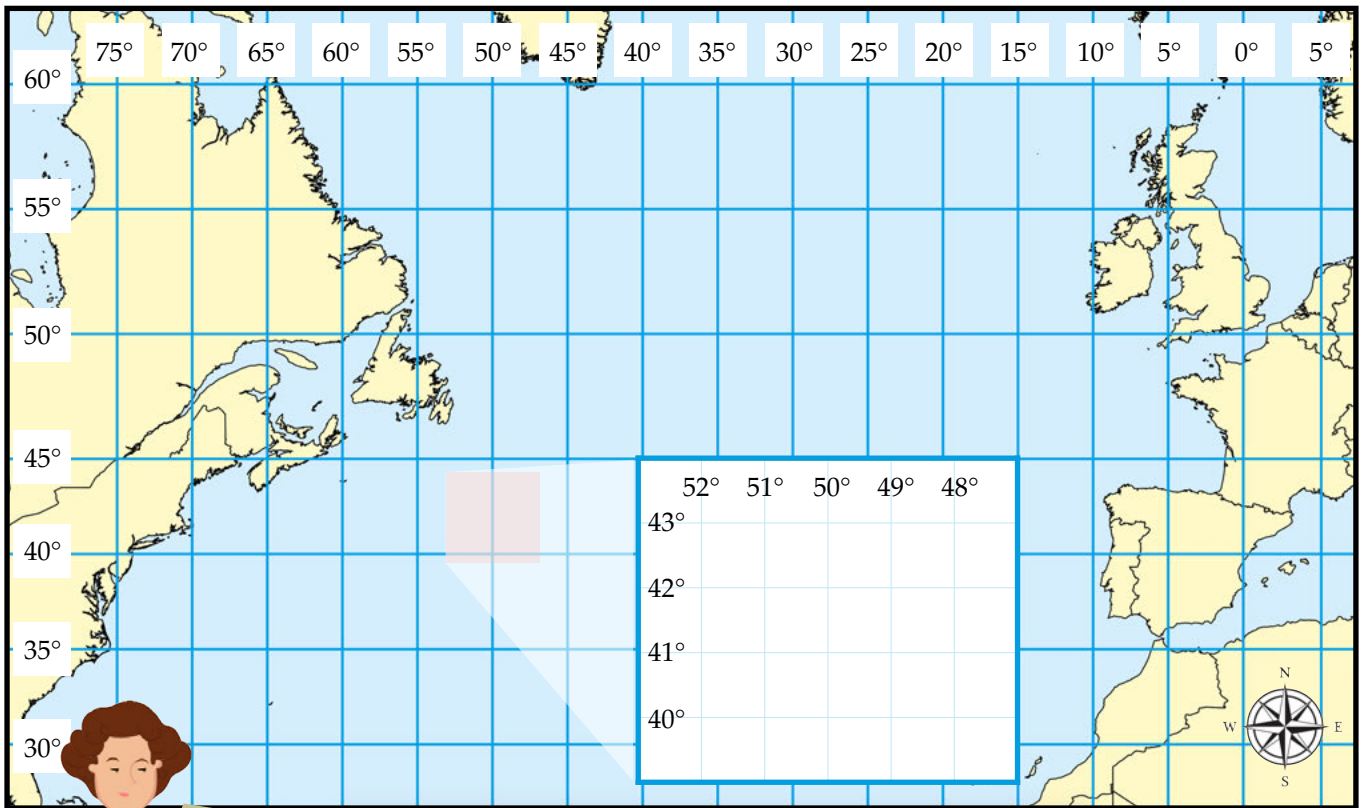
Iceberg 1 - 41°N 50°W

Iceberg 2 - 42°N 50°W

Iceberg 3 - 42°N 51°W

Name: _____

Date: _____

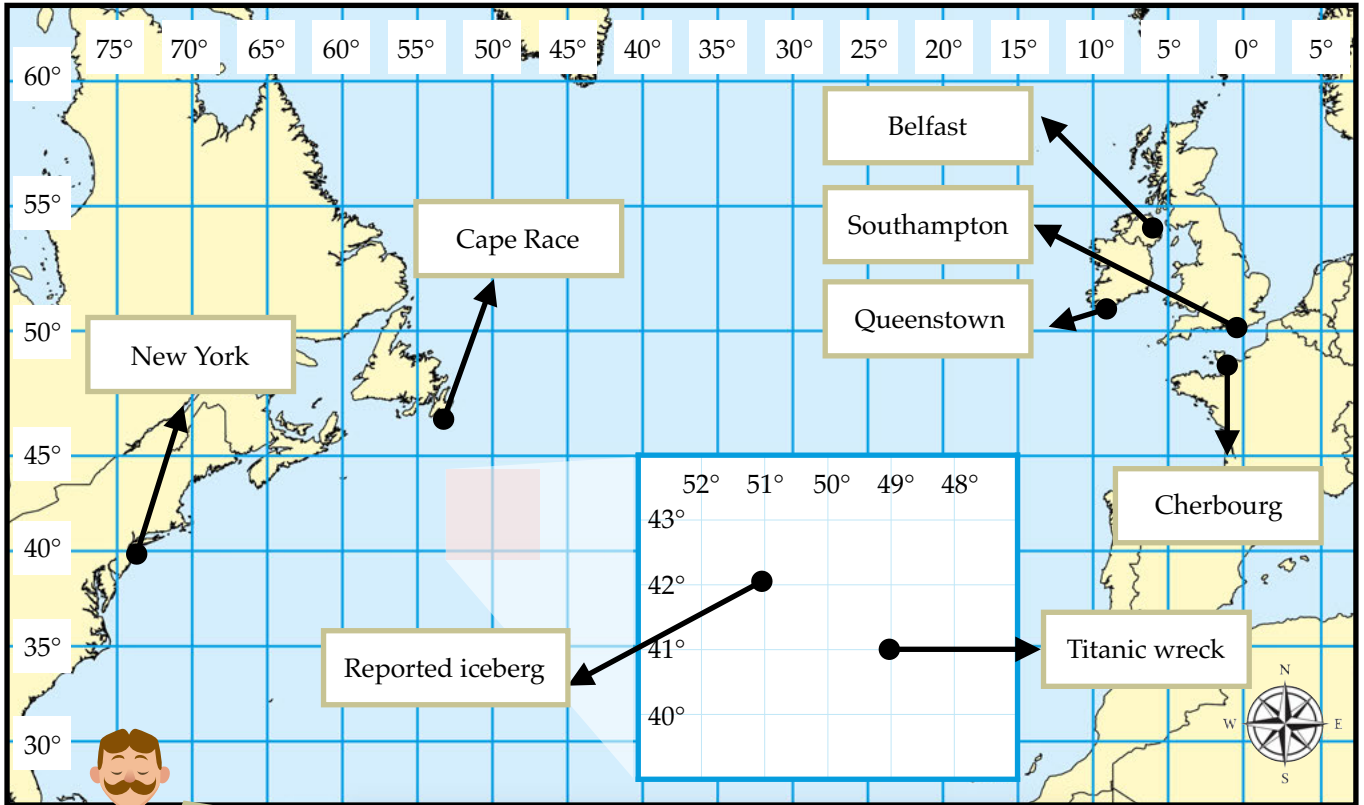


Find the answers to these statements and place them on the map. You might need to research a few of the answers. Use atlases to help you locate them.

Question	Answer/notes	Code/Colour
What ocean did the Titanic sail across?		Label on the map
Which country was the Titanic built in?		Colour blue on the map
Which city was the Titanic built in?	54°N 6°W	Tick on the map
Where did the Titanic set sail from?	50°N 1°W	Star on the map
Where was the Titanic's first stop?	48°N 2°W	Red star on the map
What country was the Titanic's first stop?		Colour yellow on the map
Where was the Titanic's second stop?	52°N 9°W	Green dot on the map
Where was the Titanic's wreck found?	41°N 49°W	Red cross on the map
Where was the Titanic headed?	40°N 74°W	Blue cross on the map
What did the Titanic hit?	41°N 50°W, 42°N 50°W, 42°N 51°W	Blue triangles on the map

Name: _____

Date: _____

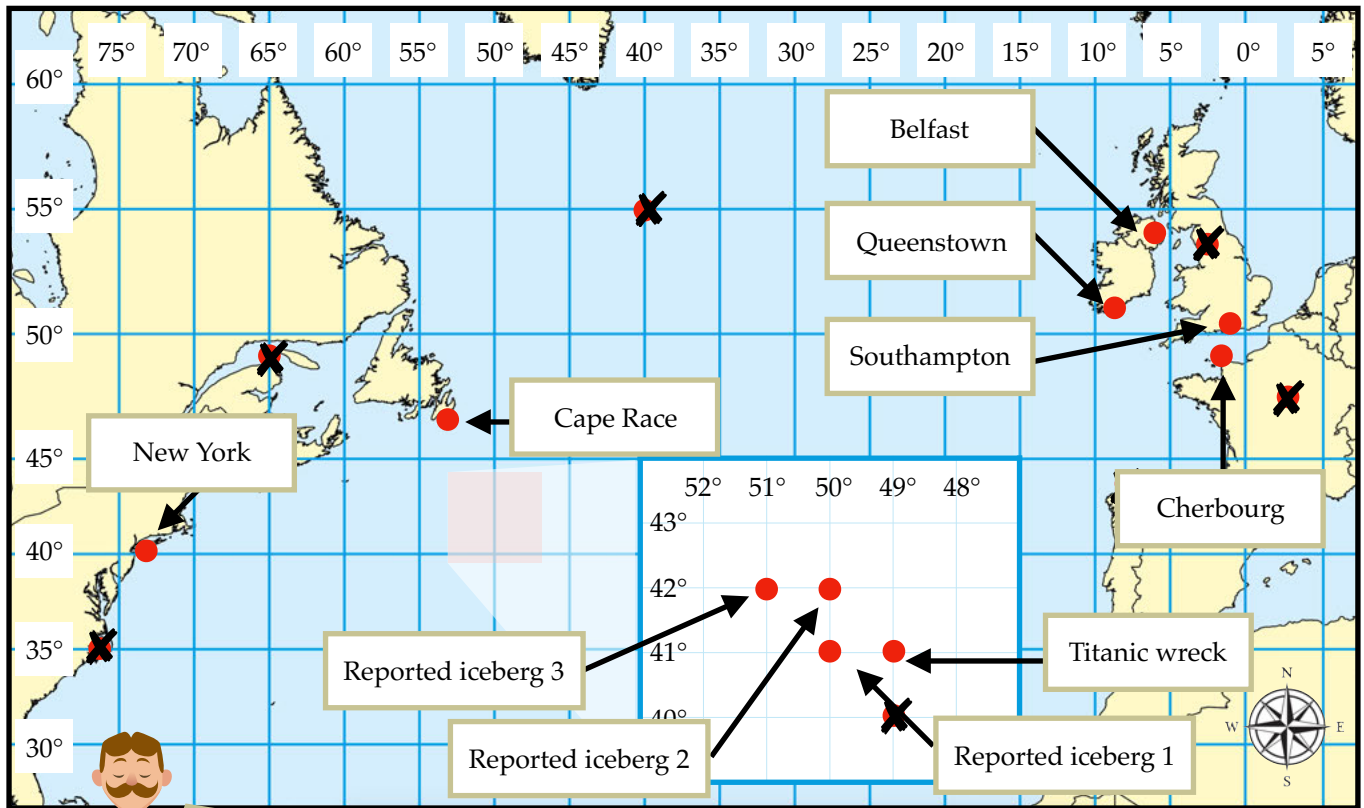


Match the locations to the correct co-ordinates using the map above to help you.

Belfast	●	●	40°N 74°W
Southampton	●	●	50°N 1°W
Cherbourg	●	●	54°N 6°W
Queenstown	●	●	41°N 49°W
Titanic wreck	●	●	42°N 51°W
Reported iceberg	●	●	48°N 2°W
New York	●	●	47°N 53°W
Cape Race	●	●	52°N 9°W

Name: _____

Date: _____



Use the dots on the map to help you find and label locations which are linked to the Titanic. Some dots are not linked to an important location. Put a cross through any of these dots.

Belfast - 54°N 6°W

Southampton - 50°N 1°W

Cherbourg - 48°N 2°W

Queenstown - 52°N 9°W

Titanic wreck - 41°N 49°W

New York - 40°N 74°W

Cape Race - 47°N 53°W

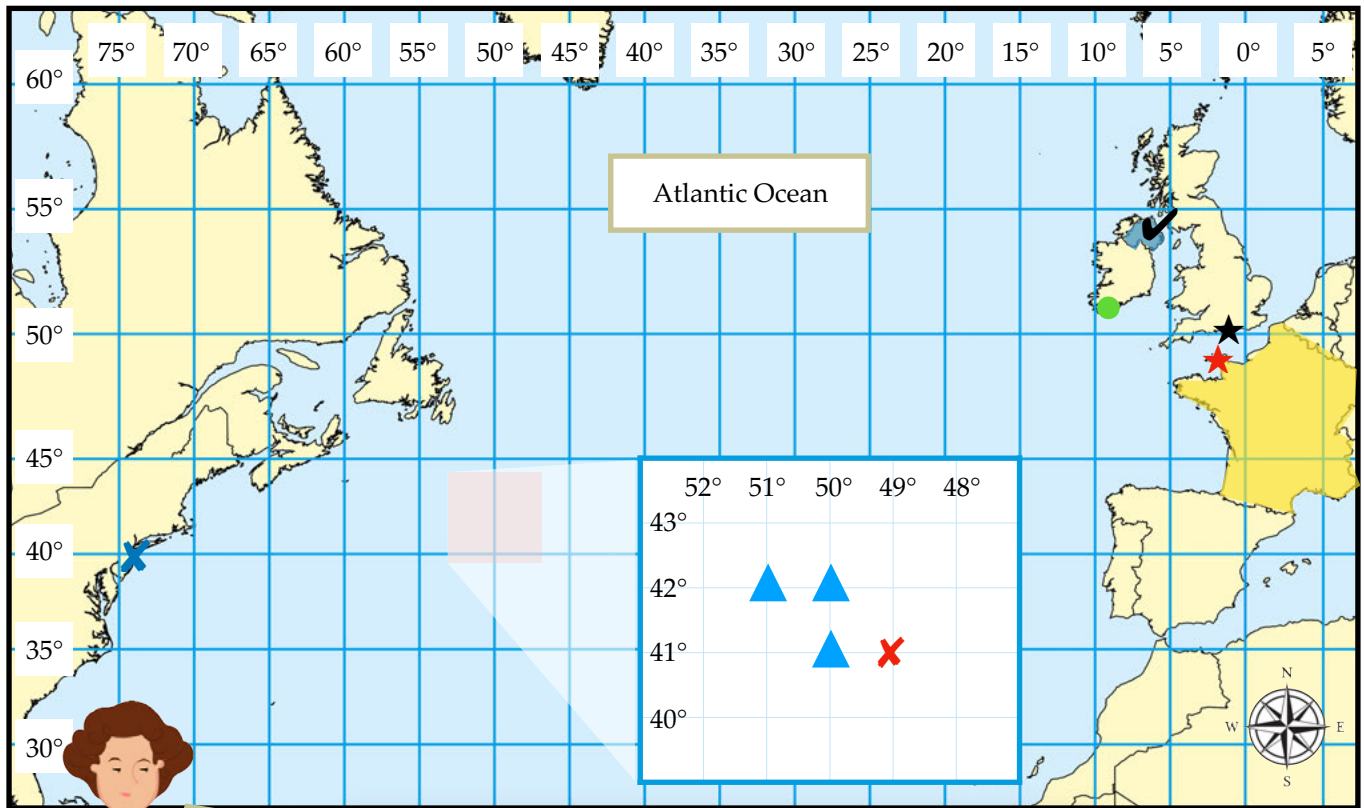
Iceberg 1 - 41°N 50°W

Iceberg 2 - 42°N 50°W

Iceberg 3 - 42°N 51°W

Name: _____

Date: _____



Find the answers to these statements and place them on the map. You might need to research a few of the answers. Use atlases to help you locate them.

Question	Answer/notes	Code/Colour
What ocean did the Titanic sail across?	Atlantic Ocean	Label on the map
Which country was the Titanic built in?	Ireland (now Northern Ireland)	Colour blue on the map
Which city was the Titanic built in?	54°N 6°W Belfast	Tick on the map
Where did the Titanic set sail from?	50°N 1°W Southampton	Star on the map
Where was the Titanic's first stop?	48°N 2°W Cherbourg	Red star on the map
What country was the Titanic's first stop?	France	Colour yellow on the map
Where was the Titanic's second stop?	52°N 9°W Queenstown	Green dot on the map
Where was the Titanic's wreck found?	41°N 49°W	Red cross on the map
Where was the Titanic headed?	40°N 74°W New York	Blue cross on the map
What did the Titanic hit?	41°N 50°W, 42°N 50°W, 42°N 51°W Icebergs	Blue triangles on the map