

PROCEDURAL

2EP18

First name _____

Last name _____

School _____

Class _____

Date of birth

Date of test

Total score (maximum 28)



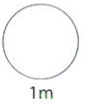
165057



Llywodraeth Cymru
Welsh Government

1 Count on in **tens**.

59 → 69 → → →

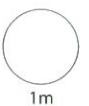


2

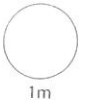


How many apples are there altogether?

apples



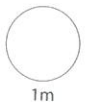
3 Write the number that is **2 more** than 98



4 Tess has these coins.



How much does Tess have altogether?

 p

5 Write the numbers in order.

48

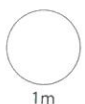
84

72

83

smallest

largest

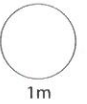


TOTAL



6


Double 9 =




1m

7


Join each clock to the correct time.



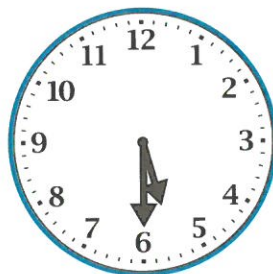
Five o'clock



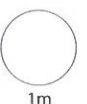
Quarter past five



Half past five



Quarter to six




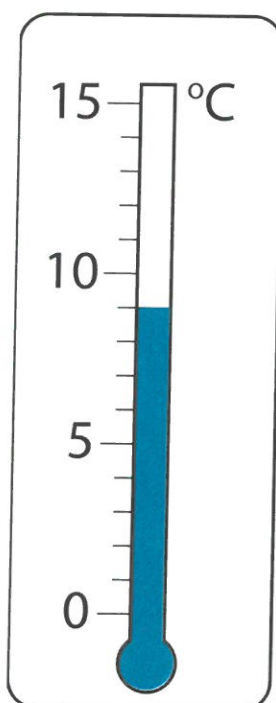
1m

8 Use a ruler.

Join the two dots that are 7cm apart.



9 What is this temperature?

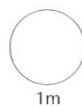
 °C

10

$$50 - 30 =$$




$$7 \times 10 =$$



11

5 biscuits in 1 bag



How many biscuits in 4 bags?

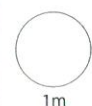
biscuits



Ross needs 35 biscuits.

How many **bags** does he need?

bags






- 12 Choose two numbers to make this correct.


$$8 + \boxed{} = 6 + \boxed{}$$



13 **Class 2: Favourite sandwiches**

| | |
|--------|---|
| cheese |  |
| tuna |  |
| egg |  |
| ham | |


Key

 = 1 child

More children choose tuna than egg.


How many more?

more children



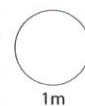
3 children choose ham.

Show this on the chart.

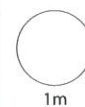


14


$$27 + 8 =$$



$$57 - 11 =$$



15 What **fraction** of this shape is shaded?





16

$$7 + 15 =$$

$$+ 7$$



- 17 **Half** of a group of children are girls.

There are **10** girls.

How many **children** are there altogether?

children


1m

18

1 lemon
25p



1 orange
40p



Ash buys **1** lemon and **1** orange.

He pays with **£1**

How much change does Ash get?



p

2m

TOTAL

7m

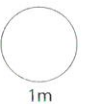
19 Mr Evans leaves home at

8 : 15

He gets back a **quarter of an hour** later.







At what time does he get back?

:



20 One shape is in the wrong place.

Put a cross (x) in it.

| Has a right angle | Does not have a right angle |
|---|--|
|  |  |
|  |  |
|  |  |



21

Circle the correct answer.

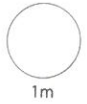
The mouse weighs

20 metres

20 kilograms

20 litres

20 grams



22 Seren has 90p altogether.

She has **two** 20p coins and some 10p coins.

How many 10p coins does she have?



She has

10p coins.

