

PROCEDURAL

5EP16

First name _____

Last name _____

School _____

Class _____

Date of birth

Date of test

Total score (maximum 35)




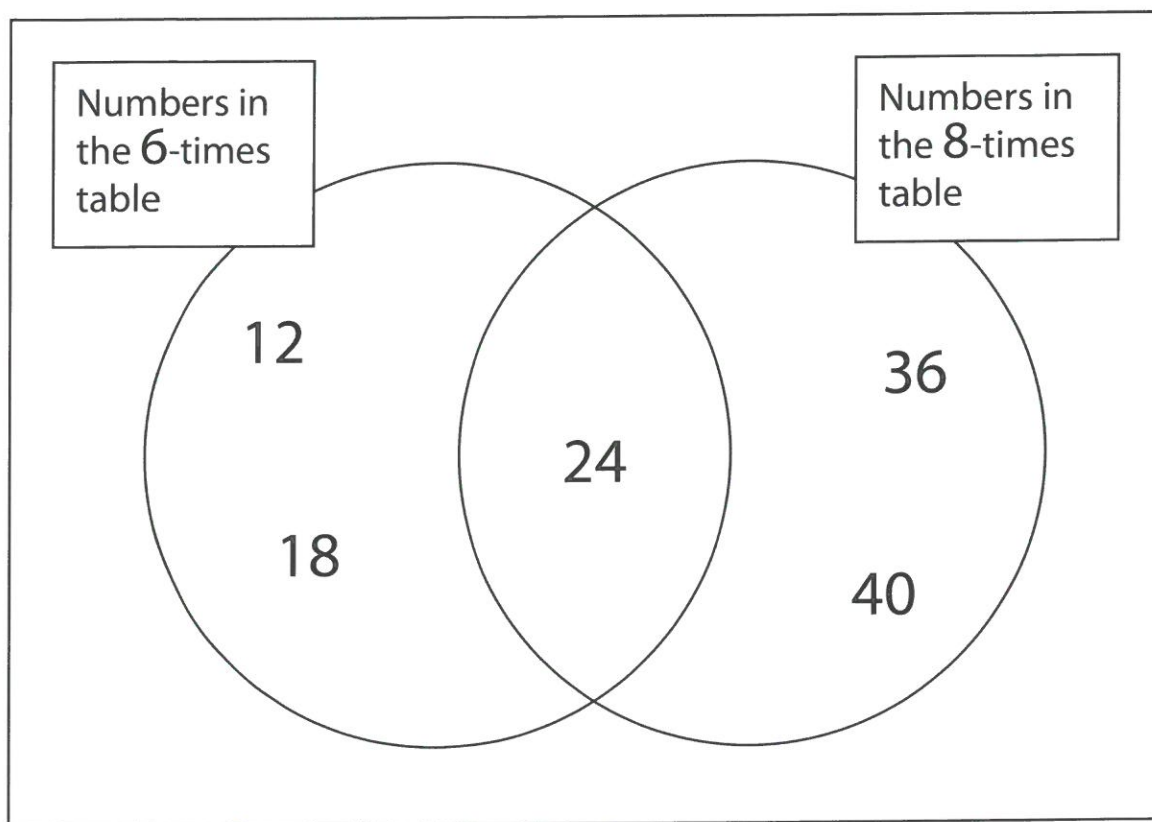
139104



Llywodraeth Cymru
Welsh Government


- 4 Which number is in the **wrong** place on the Venn diagram?

Circle your answer.



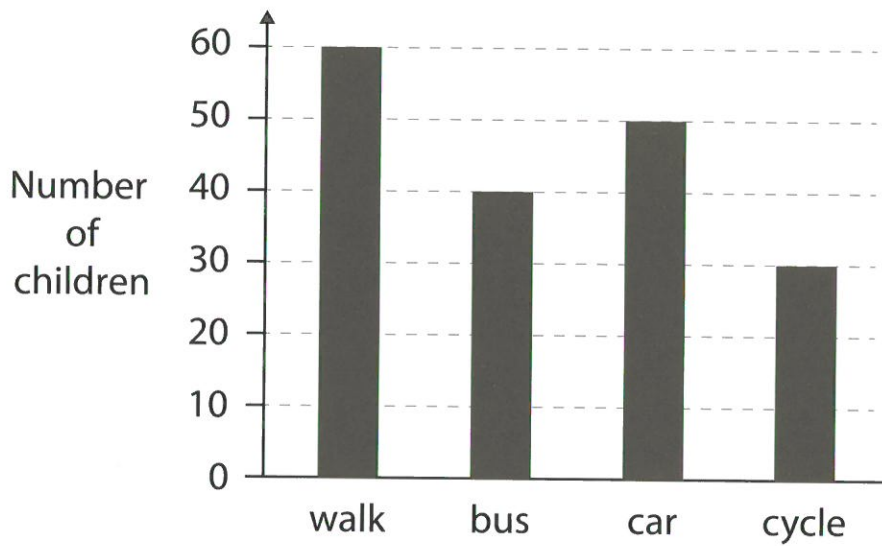
5

$\frac{1}{2}$ kilogram = grams



6

How children travel to school



How many **more** children travel by **car** than **cycle**?

more

1m

What **fraction** of the children walk to school?

Circle your answer.

$\frac{1}{4}$

$\frac{1}{2}$

$\frac{2}{3}$

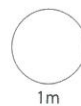
$\frac{1}{3}$

$\frac{1}{6}$


1m

7

$$100 \div 5 = \boxed{} \times 10$$



8




**2 tins of beans
for £1.25**

Mrs Patel buys **6** tins of beans.

How much does she pay?

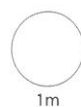
£



She pays with a **£20** note.

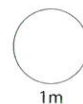
How much change should she get?

£



9

Double 25 = Half of



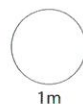
10



The temperature in Swansea is 3°C .

In Corwen it is 7°C colder.

What is the temperature in Corwen?

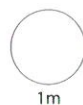
 $^{\circ}\text{C}$ 

11

A trip for 10 people costs £456

They share the cost equally.

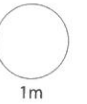
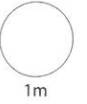
What is the cost for each person?

 £


12

$$823 + 598 =$$

$$823 - 598 =$$



13



From: Rosslare (Ireland)

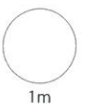
Ferry

To: Pembroke (Wales)

The ferry leaves at 15 : 30 and takes 3 hours and 55 minutes.

What time does it arrive at Pembroke?

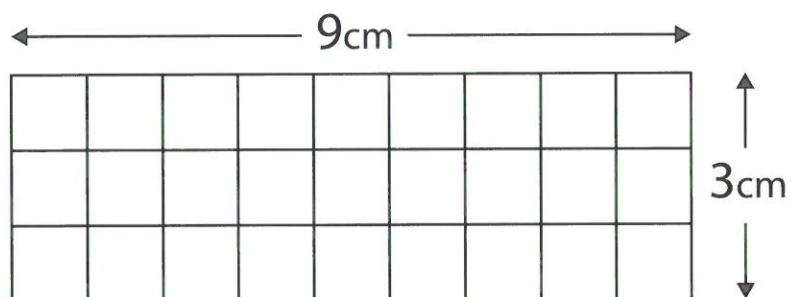
:



TOTAL




14



What is the **perimeter** of this rectangle?

cm





What is the **area** of the rectangle?

cm²



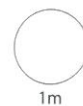
15 Fill in the gaps in the table.

Fraction		Decimal
$\frac{1}{4}$	=	
	=	0.3



16

$$258 \div 6 = \boxed{}$$



Write a calculation to check your answer.

$$\boxed{} \times \boxed{} = \boxed{}$$



17

$$1250 \text{ millilitres} = \boxed{} \text{ litres}$$




18


There are 72 children in a school.

$\frac{5}{8}$ of the children are boys.

How many boys are in the school?



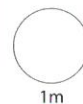
boys



TOTAL



- 19 Write the number that is 100 less than 100 000



- 20 Find the difference between 15.5 and 13.8



- 21 8 bars of chocolate cost £7.20

How much do 12 bars cost?



£



22

$$\div 100 = 13.7$$

$$\times 100 = 25$$

1m


1m

23

Scores in a test

Ben	13
Nor	6
Ifan	14
Bryn	9
Sian	8

What is the **mean** score?



2m

TOTAL

8m

