


1 Put four wheels on each car. How many can now race?


(a)



(b)




(c)




(d)



(e)



(f)



2 (a)  $8 \div 4$

(b)  $36 \div 4$

(c)  $24 \div 4$

(d)  $0 \div 4$

(e)  $20 \div 4$

(f)  $16 \div 4$

3 (a) 4 divided by 4

(b) One quarter of 28

(c) Divide 40 by 4.

(d) How many fours make 32?

(e) One quarter of 12

(f) Divide 8 by 4.