



1 Share equally among 3 rugs.


(a)



(b)



(c)



2 How many children can have 3 each?


(a)




(b)




(c)



(d)



(e)



(f)



3 Copy and complete.

