




- 1 A school group of fifty people is visiting the London Eye.
- 10 % are adults
 - 58 % are girls
- How many are **boys**?



- 2 Bigcity United's ticket prices are about to rise by 5%.
What will the new price of this ticket be?

- 3 Sixty fair-haired children are 30% of the total number who attend Brockley School.
How many children altogether attend the school?

- 4 Bigcity United played thirty games last season.
They won 60% of these.
How many games did they **lose**?

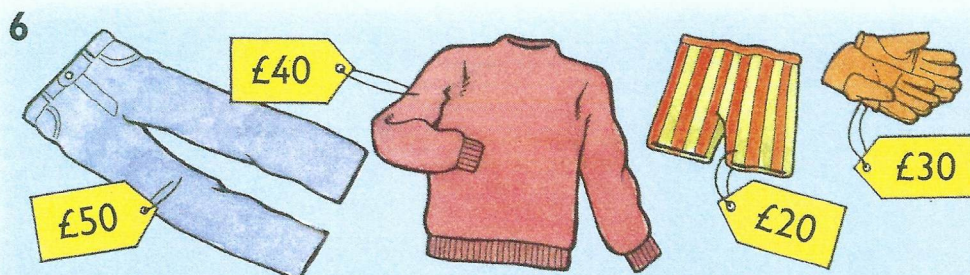


I had twenty - four out of thirty - two questions correct in a sports quiz.

I was correct in one hundred and forty - eight questions out of two hundred in a pop music quiz.



Who had the greater **percentage** of questions correct?



What is the **cheapest** total cost of the four items, using the *Discount Vouchers*? Explain.

Discount Vouchers

Half price
any item costing less than £50

Take 10% off
any item

Take £6 off
any item