


Name: _____


The Castle shop



Patchwork quilts, each with 100 patches, are sold in the Castle shop.

1 For each quilt, find the percentage which is • grey • white


(a)




grey _____ %

white _____ %

(b)




(c)



2 Complete.


$$20\% = \frac{\quad}{100}$$

$$75\% = \frac{\quad}{100}$$



- 3 (a) Colour this quilt • 12% blue
• 20% red
• 50% green.

(b) What percentage is not coloured? _____



4 (a) What percentage of this quilt is

• grey _____ • black? _____

(b) Use red and green to colour the rest of the quilt.

(c) Complete. _____ % is coloured red
_____ % is coloured green.