






1 Which of the shapes is Zoë describing?



All the angles are right angles.
The opposite sides are equal **and** parallel.



2 Name the shapes

- (a) with more than two diagonals
- (b) with **only** two right angles
- (c) with opposite sides that are equal **and** parallel
- (d) that are irregular.

