





In the Castle shop




- 1 For each quilt, write
- the fraction grey
 - the percentage grey.




(a)



(b)



(c)





- 2 Copy and complete: (a) $50\% = \frac{1}{2}$ (b) $25\% = \frac{\quad}{\quad}$ (c) $10\% = \frac{\quad}{\quad}$

3 Find

- | | | | |
|---------------|---------------|---------------|----------------|
| (a) 50% of 14 | (b) 50% of 22 | (c) 50% of 40 | (d) 25% of 12 |
| (e) 25% of 28 | (f) 25% of 48 | (g) 10% of 50 | (h) 10% of 90 |
| (i) 10% of 30 | (j) 50% of 34 | (k) 25% of 56 | (l) 10% of 100 |

- 4 In each box, 50% of the pencils are green and 25% of the pencils are blue.

How many pencils in each box are
(a) green (b) blue?



- 5 There are 300 postcards in the shop. 50% are large and 10% are small.
How many are (a) large (b) small?

- 6 The shop has 80 quilts. 10% of the quilts are large, 50% are medium and the rest are small.
- (a) How many quilts are • medium • large?
- (b) What percentage of the quilts are small?