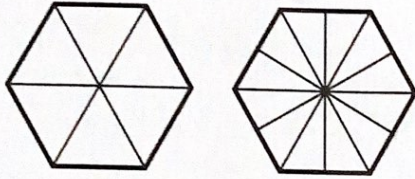
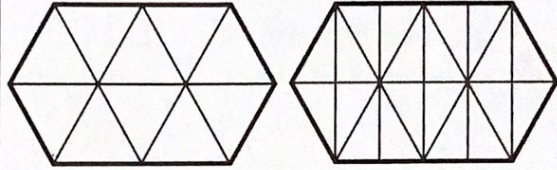


Name: _____

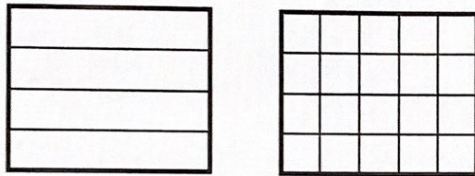
Colour the shapes to match each equal fractions story.



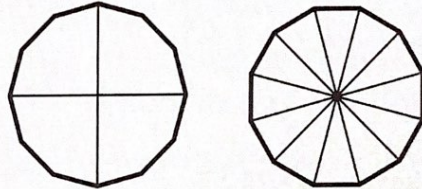
$$\frac{1}{6} = \frac{2}{12}$$




$$\frac{1}{10} = \frac{2}{20}$$



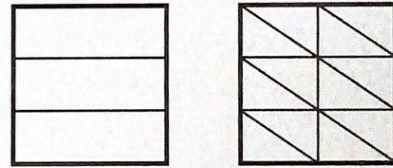
$$\frac{1}{4} = \frac{5}{20}$$




$$\frac{1}{4} = \frac{3}{12}$$



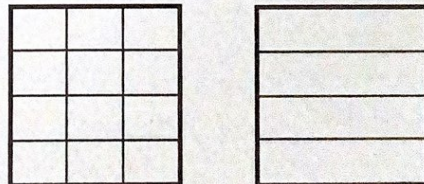
$$\frac{1}{3} = \frac{3}{9}$$



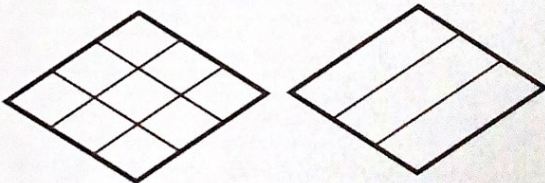
$$\frac{1}{3} = \frac{4}{12}$$



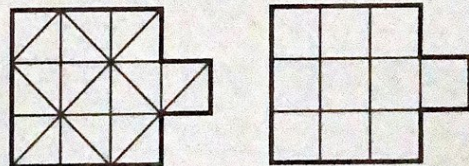
$$\frac{1}{5} = \frac{4}{20}$$



$$\frac{9}{12} = \frac{3}{4}$$



$$\frac{6}{9} = \frac{2}{3}$$



$$\frac{20}{20} = \frac{10}{10}$$