





1 Find the total cost of



2 Draw (a) two things you can buy for 45p  
(b) three things you can buy for 80p.

3 Make 100.

