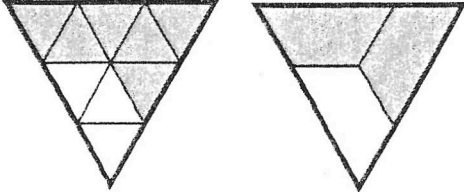
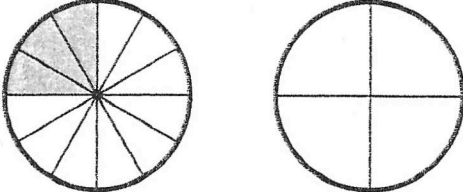
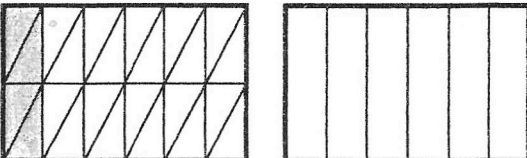
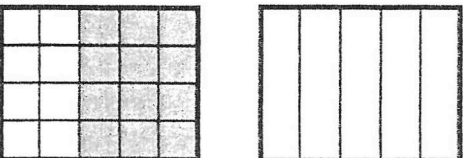
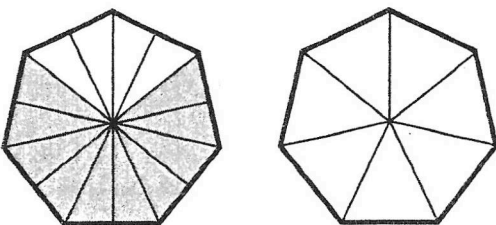
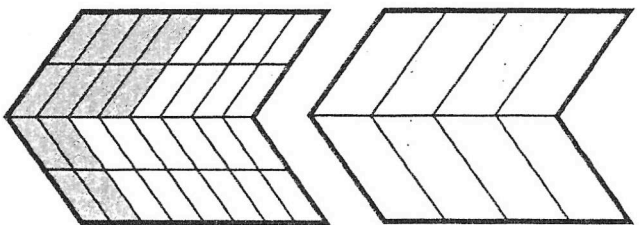
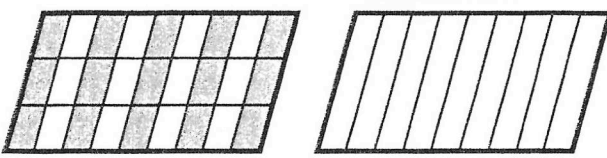
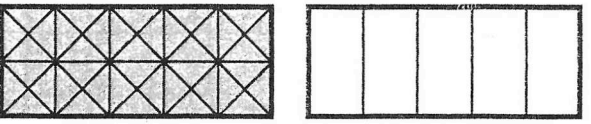
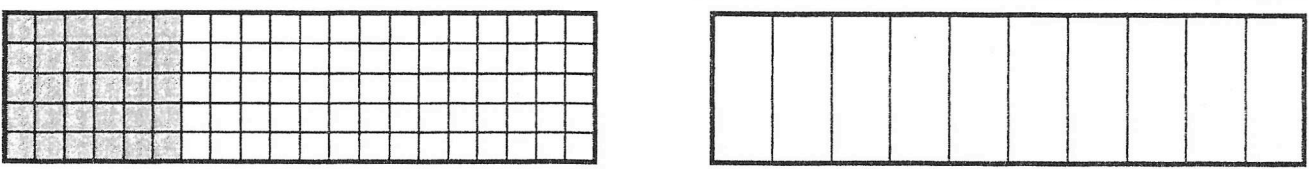


Name: _____

Shade the second shape in each pair to match the first one.
Complete each equal fractions story.

 $\frac{6}{9} = \frac{2}{3}$	 $\frac{4}{12} = \frac{1}{3}$
 $\frac{4}{12} = \frac{1}{3}$	 $\frac{8}{16} = \frac{1}{2}$
 $\frac{4}{8} = \frac{1}{2}$	 $\frac{8}{16} = \frac{1}{2}$
 $\frac{8}{16} = \frac{1}{2}$	 $\frac{8}{16} = \frac{1}{2}$
 $\frac{12}{40} = \frac{3}{10}$	