

1 Write each time as a 24 - hour time.

(a)



1.15pm

(b)



10.31am

(c)




11.05pm

(d)



9.07pm

(e)



7.51am


(f)



12 noon


2 Write each time as a 12 - hour time. Use am or pm.

(a)



17:00

(b)



16:48

(c)



08:45

(d)




19:26

(e)



10:10

(f)



20:11

3 Find the missing times.

12 - hour time	6.18 pm	(b)	(c)	12.05 am
24 - hour time	(a)	09:43	14:56	(d)

4 Write these times in order. Start with the earliest.

4.23pm 10:16 12.01am 20:38 10.16pm 04:19

- 1 Use the events on the notice board to make a programme for tomorrow.
Write all the times as 24-hour times.

★ Tomorrow's Events

 <p>Fashion show 15:12</p>	 <p>Water polo 09:03</p>	 <p>Gala dinner 9.00pm - 10.00pm</p>
 <p>Crazy Golf 3.53pm</p>	 <p>Aerobics 10.45am</p>	 <p>Fireworks 23:53</p>
 <p>Lunch 12 noon - 2.00pm</p>	 <p>Breakfast 08:00 - 10:30</p>	
 <p>Live show 10.04pm</p>	 <p>Jogging 6.48am</p>	

- 2 Which event takes place
- (a) 1st (b) 4th (c) 7th (d) last?
- 3 Which event starts
- (a) 30 minutes after 11.02am (b) 15 minutes before 16:08
(c) 20 minutes after 8.43am (d) 25 minutes before 00:18?
- 4 Which events take place between
- (a) 15:00 and 17:00 (b) 07:00 and 09:00
(c) 11:15 and 15:15 (d) 11:29 and 13:29?