

Name: \_\_\_\_\_

Check-up

6

$18 + 5 = \square$

$7 + 19 = \square$

$17 + 4 = \square$

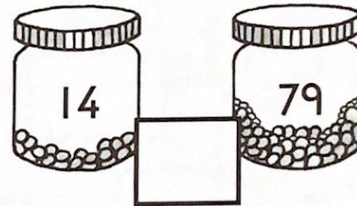

What is the total of 29 and 3?  $\square$

$65 \text{ plus } 8 = \square$

Find the sum of 6 and 34.  $\square$

$\text{Add } 7 \text{ to } 46. \square$


Find each total.



$67 + 15 = \square$

$39 + 12 = \square$

$58 + \square = 75$



Add the numbers on the

cars  $\square$

trucks  $\square$

buses  $\square$

$49 + 23 = \square$

$26 + 47 = \square$

$55 + \square = 93$

$6 + 13 + 4 = \square$

$14 + 11 + 7 = \square$

$8 + 3 + 12 + 5 = \square$

$14 + 10 + 14 + 2 = \square$