
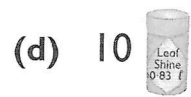


Garden Warehouse



1 What is the total volume of liquid in:



2 (a) 10×3.7

(b) 10×6.2

(c) 18.4×10

(d) 6.41×10

(e) 100×5.9

(f) 100×78.1

(g) 0.42×100

(h) 4.06×100

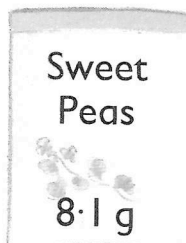

(i) $\square \times 2.8 = 28$

(j) $0.16 \times \square = 16$

(k) $\square \times 10 = 53$

(l) $100 \times \square = 108$

3



Find the weight of seeds in

(a) 20 packets of

• Pansies

• Lobelia

• Marigolds

(b) 30 packets of

• Sweet Peas

• Marigolds

• Cornflowers

(c) 70 packets of

• Pansies

• Sweet Peas

• Marigolds

(d) 90 packets of

• Lobelia

• Sweet Peas

• Cornflowers.

4 (a) 3.2×40

(b) 1.7×50

(c) 80×6.3

(d) 60×7.4

(e) 0.51×70

(f) 0.68×20

(g) 30×0.49

(h) 50×0.35

(i) 0.06×90

(j) 80×8.6

(k) 40×10.3

(l) 70×10.2

5 Find the total cost of 30 tomato plants and 20 strawberry plants.

