

1 List the first eight numbers in each sequence.

(a)



Start at 0. Count on 0.1 each time.

(b)



Start at 2. Count on 0.5 each time.

(c)



Start at 4. Count 0.25 each time.

(d)



Start at 10. Count back 0.1 each time.

(e)



Start at 8. Count back 0.5 each time.

(f)



Start at 6. Count back 0.25 each time.

2 Copy and complete each sequence.

(a) 0.92, 0.94, 0.96, ■, ■, ■, 1.04

(b) 1.76, 1.77, 1.78, ■, ■, ■, 1.82

(c) 2.54, 2.52, 2.50, ■, ■, ■, 2.42

(d) 3.04, 3.03, 3.02, ■, ■, ■, 2.98

3 Write the 2-place decimal fraction

(a) before 6.48

(b) after 7.35

(c) before 5.86

(d) after 3.24

(e) before 8.21

(f) after 1.69.

4 Write the 2-place decimal fraction between

(a) 0.47 and 0.49

(b) 3.58 and 3.60

(c) 5.99 and 6.01.








5 Write a 2-place decimal fraction between

(a) 0.67 and 0.74

(b) 1.81 and 1.9

(c) 3.9 and 4.05.

6 Write each decimal as a mixed number.

(a) (b) (c) (d) (e) (f) (g) (h) 