


1 Write as a decimal fraction.


(a)




(b)



(c)



(d)



(e) three tenths and six hundredths


(f) thirty-three hundredths

(g) nine hundredths

(h) seven and one hundredth

2 Copy and complete each sequence.

(a)




(b)



(c)



(d)



3 Write the number between:

(a)




(b)



(c)



(d)



4 Write a number between:

(a) 3.53 and 3.58

(b) 10.01 and 9.92

(c) 4.00 and 4.10

(d) 11.22 and 10.01

(e) 37.66 and 37.56

(f) 100.55 and 99.99