

REASONING

5ER15

First name _____

Last name _____


School _____

Class _____

Date of birth ○○ ○○ ○○○○

Date of test ○○ 05 2015

Total score (maximum 20)



128952



Llywodraeth Cymru
Welsh Government



1



Each **lie**:
nose **5cm longer**

Each **truth**:
nose **3cm shorter**

Tuesday



Woke up  Nose 8cm	In the day he told 1 lie and 1 truth	Bedtime  Nose ? cm
--	---	---

How long was his nose at bedtime on Tuesday?


cm



Friday

Woke up  Nose 15cm	In the day he told 1 lie and ? truths	Bedtime  Nose 8cm
---	--	--

Work out how many **truths** he told on Friday.



truths





Each lie:
nose **5cm longer**

Each truth:
nose **3cm shorter**

On Sunday, he told **3 lies** and **5 truths**.

Was his nose the **same length** at bedtime as when he woke up?

Show how you know.



On Monday, he told **more than 3 lies**.

His nose was the **same length** at bedtime as when he woke up.

Work out how many lies and truths he might have told on Monday.



and

truths



TOTAL



2

Cups: 4 colours

purple (P), yellow (Y), red (R), green (G)

Straws: 4 colours

purple (P), yellow (Y), red (R), green (G)




I want my straw and cup to be **different colours**.


Show all the ways the straw and cup can be different colours.

A large empty rectangular box with a red border, intended for drawing or writing. In the top-left corner of the box, there is a small icon of a notepad with a pencil.

3 The scales show different weights.






Work out how much the big dog weighs.



A large rectangular area for writing the answer, with a pencil and paper icon in the top left corner. At the bottom right of this area, there is a small box containing the text "kg".

4 **20** children want drinks.

<p>3 want a cup of lemonade</p> 	<p>8 want half a cup of lemonade with half a cup of orange</p> 	<p>9 want a cup of orange</p> 
--	---	--

There is this much drink to share:



gives **10** cups.


Each



gives **5** cups.

Can **all 20** children have the drinks they want?


Show how you know.



- 5 Joe is planning his birthday party.
It will be at STOMPS.

STOMPS

Food £6.99 each	Party bags £1.20 each	Balloons 75p each
----------------------------------	--	------------------------------------




Please can each person have food, a party bag and a balloon?



Yes, but the most we can spend is **£100**

What is the greatest number of people that can go to STOMPS?
Show how you know.



people