


# Digital Time – Mixed

What is the time?

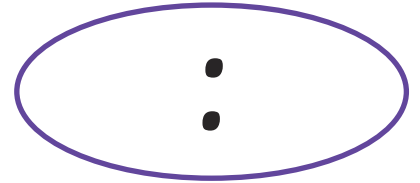
Write digits in the clocks to show the time. The first one has been done for you.



10 o'clock




half past 5




9 o'clock




half past 8




half past 12




3 o'clock



half past 1



7 o'clock




half past 11



4 o'clock



half past 6



5 o'clock

# Digital Time – Mixed Answers

What is the time?

Write digits in the clocks to show the time. The first one has been done for you.

**10:00**

10 o'clock

**05 : 30**

half past 5

**09:00**

9 o'clock

**08 : 30**

half past 8

**12 : 30**

half past 12

**03:00**

3 o'clock

**01:30**

half past 1

**07:00**

7 o'clock

**11:30**

half past 11

**04:00**

4 o'clock

**06 : 30**

half past 6

**05:00**

5 o'clock