

Christmas Addition and Subtraction Challenge Cards

twinkl

LKS2 Christmas Addition and Subtraction

1. Santa's elves have put sparkly red bows on 529 presents and blue sparkly bows on 347 presents. How many presents have they put bows on altogether?



LKS2 Christmas Addition and Subtraction

2. The elves must clean the bells on the reindeer harnesses until they shine. There are 240 bells altogether. They have cleaned 112 of them.

How many do they have left to clean?



LKS2 Christmas Addition and Subtraction

3. A shop is selling Santa hats. They had 1329 in the stock room. They have sold 1048 hats so far. How many do they have left to sell?



4. Mr Smith is writing his Christmas cards. He has 113 to write. He has written 92. How many more does he need to write?



5. Baldwin the bad elf has hidden 1039 bottles of giggle juice that are for the North Pole Christmas party! Now there are only 233 bottles left. How many bottles should there have been?



6. Santa has travelled 4160 miles in 3 hours. He travels 3915 miles in the next 2 hours.

How far has he travelled in 5 hours?




7. Santa is reading his book called "Reindeer Health in the Winter". He has read 242 pages so far. There are 308 pages altogether.

How many pages does he have left?



8. In December, last year, 5639 people visited Greenland. This year, there were 2485 more people.

How many were there this year?



9. The Greenland elves are playing airball against the Icelandic elves. The Greenland elves score 88 points. The Icelandic elves score 73 points.

How many points were scored altogether?



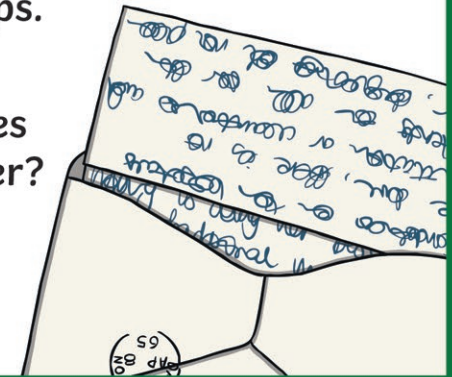
10. Mrs Claus makes 275 mince pies for the elves in Santa's workshop. They ate 191 of them!

How many were left?



11. Mrs Peters buys some stamps for her Christmas cards. She has 38 first class stamps and 54 second class stamps. She uses 29 of the first class stamps and 41 of the second class stamps.

How many stamps does she have left altogether?



12. Kuba has 201 chocolate tree treats and 119 chewy elf sweets.

How many sweets does he have altogether?



13. Santa's Grotto had 2684 visitors during the first week in December, and a further 1937 visitors in the second week.

How many visitors went to Santa's Grotto in the first two weeks?



14. A shop ordered 5629 Christmas puddings. They sold 3289 in the first week of December.

How many did they have left to sell?



15. Mrs Claus was buying crackers for the elves' Christmas party. She had bought 234 so far, but needed 520 altogether.

How many more did she need to buy?



16. Santa has 53 740 presents to deliver. He has delivered 38 593 so far.

How many does he have left to deliver?




17. Christmas turkeys cost £50.25 for 10 people. Lizzie has got £35.70.

How much more money does she need to buy the turkey?



18. The Christmas lights are lit on the High Street. There are 1250 fairy lights strung up. 128 of them don't work.

How many do work?




19. The elves are having a race to see who can wrap the most presents in one hour. Tinkle has wrapped 209 presents. Tizzy has wrapped 311. How many more presents has Tizzy wrapped compared to Tinkle?

How many have they wrapped altogether?



20. In Santa's workshop, 4749 robots were made and 3555 remote control cars.

How many robots and cars were made altogether?



Christmas Challenge Cards Answers

1. 876
2. 128
3. 281
4. 21
5. 1272
6. 8075 miles
7. 66 pages
8. 8124
9. 161
10. 84
11. 22 altogether
12. 320
13. 4621
14. 2340
15. 286
16. 15 147 left
17. £14.55
18. 1122
19. Tizzy has wrapped 102 more presents.
They wrapped 520 altogether.
20. 8304