

Friday 12th June

Please complete work / drawings / art work / printed off images in the purple book provided.

• **Activity 1- Maths skills.**









GROUP 1- See attached sheets and fraction skills for group 1.

GROUP 2 AND 3 - WAL: to solve word problems.

Read the problems below.

Will you need to add or take away?

Write the sum and show your workings out.

<p>Problem 1.</p> <p>Sam has 14 chocolate bars. She buys 6 more. How many does she have altogether?</p> 	<p>Problem 2.</p> <p>Eddie has 33 chips on his plate. He eats 9 of them. How many does he have left?</p> 
<p>Problem 3.</p> <p>Keon has 27 raffle tickets. He sells 8. How many does he have now?</p> 	<p>Problem 4.</p> <p>Alfie has 44 marbles. He finds 10 more. How many does he have now?</p> 
<p>Problem 5.</p> <p>Dylan cooks 50 burgers. He eats 7 of them. How many are left?</p> 	<p>Problem 6.</p> <p>Mollie has 18 tea bags. She makes 4 cups of tea. How many tea bags does she have left?</p> 
<p>Problem 7.</p> <p>Charlene buys 44 books. Then she buys 11 more. How many does she have now?</p> 	<p>Problem 8.</p> <p>Rio plays with 22 dinosaurs. He puts 5 back in the box. How many is he playing with now?</p> 

Activity 2- social games.

Every Friday is Funky Friday in Blaendulais Primary so we give pupils opportunity to practise their social skills, playing games and sharing lego / k'nex for example. Sharing, taking turns, following rules but most of all- having fun ☺

Well done for all of your hard work this week ☺