

Write out the fact family for:

$7 + 8 = 15$

Name: \_\_\_\_\_

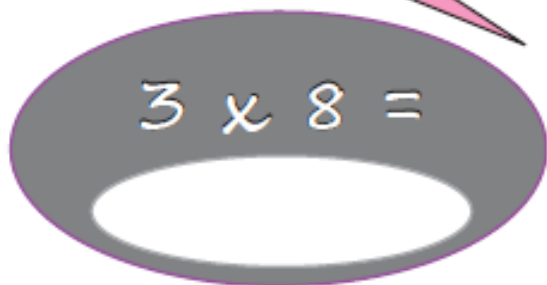
$70 + 40 =$



# BIG MATHS BEAT THAT!

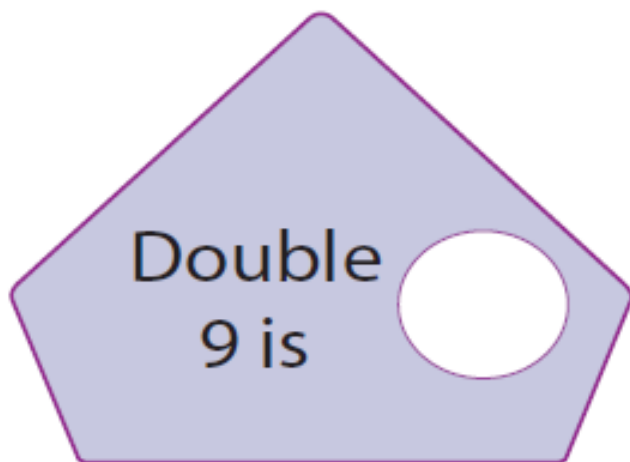
Draw a ring around the even numbers

43      12      66      39

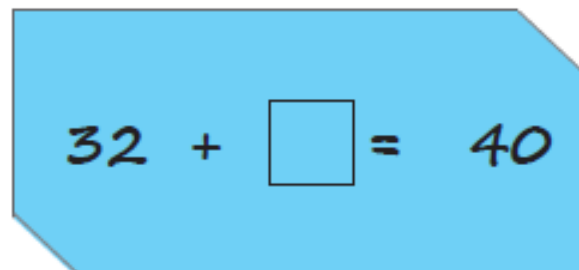


$3 \times 8 =$

Double 9 is



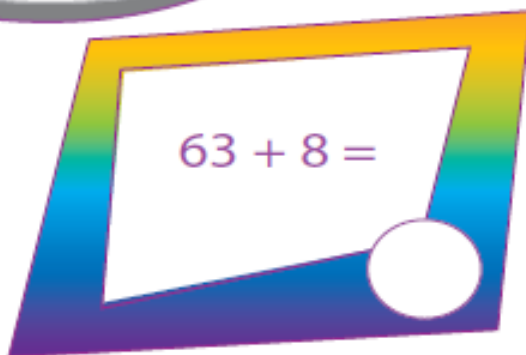
$32 + \square = 40$



Half of 12 is...



$63 + 8 =$



$71 - 5 =$

