




Who chooses what?

16mm	
16cm	
1.6m	

If they chose the following items – what lengths would they be. Choose one for each object.

	30mm
	30cm
	3m
	5m
	50cm
	500mm
	23m
	23mm
	23cm