


There are 5 pairs of Christmas stockings hanging up.
How many stockings are there altogether?



What times tables could you use to work this out quickly?

twinkl.co.uk

Father Christmas is twice as tall as his elves.
How tall is Father Christmas?



twinkl.co.uk

You are one of Father Christmas' helpers.
Make sure the 3 children at 25 Stable Road each get the same number of presents.



Use equal sharing to share the presents between the 3 children.

twinkl.co.uk



Can you make a model chimney to show one of the elves what Santa has to get down?

Your chimney could be a cylinder or a cuboid.

twinkl.co.uk

6 is Rudolph's favourite number.
How many calculations can you find with the
answer 6?



Have you used addition, subtraction and
multiplication?

twinkl.co.uk



This is a very popular elf game.
Throw your bean bags into the buckets
numbered 1, 2, 3 and 4.



The elf with the highest score wins!


twinkl.co.uk

Father Christmas needs to get all the
children's presents delivered before 07:00.



It's already 02:30!
How much longer has Father Christmas got?

twinkl.co.uk



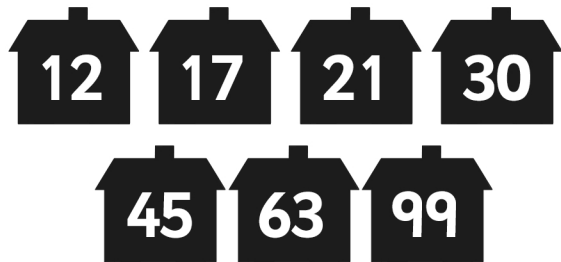
Fold your paper in half and cut along 1 side
to make a symmetrical Christmas tree.
You could also try making a symmetrical
star, snowflake or snowman!

twinkl.co.uk

Can you help Father Christmas' reindeer?




They have already delivered presents to the houses with even numbers. Which houses haven't had their presents delivered?



twinkl.co.uk

Mrs Christmas is knitting Father Christmas some new Christmas socks.



Can you work out what colour the 9th stripe of the sock will be?

twinkl.co.uk