
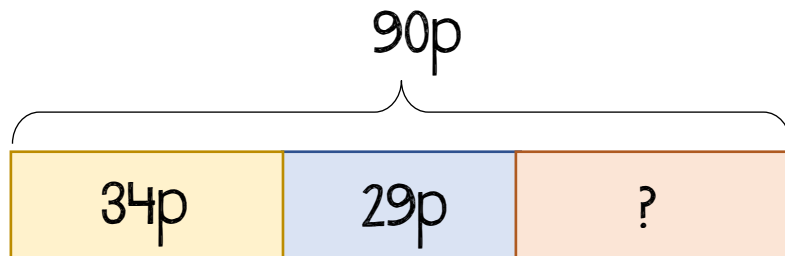



1 Helen buys these items.



She spends 90 pence in total.  
How much does the balloon cost?



2 The blue bucket contains 3 times as much water as the yellow bucket.



There is 24 litres of water in total.  
How much water is in the blue bucket?

