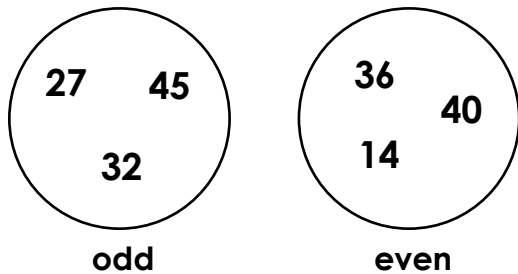


Odd and Even Numbers

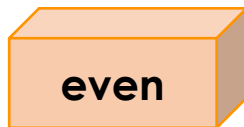
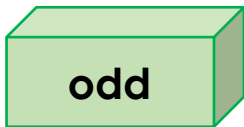
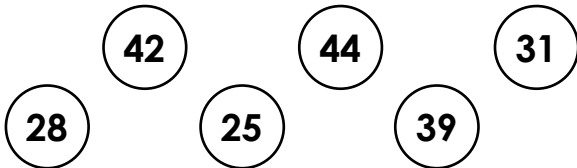
1. Circle all the even numbers.

33
18
41
46
24
20
15
37

2. True or false? These numbers are correctly sorted.



3. Sort the balls into the correct boxes.



4. Is the amount shown odd or even?



odd

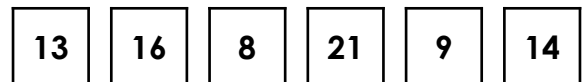
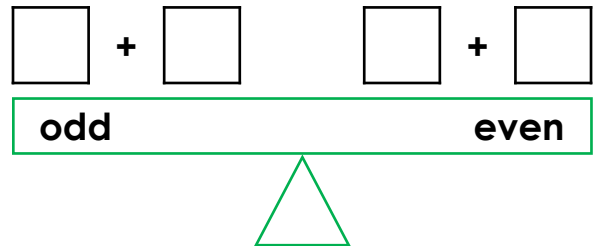
even

5. Clara rolls two dice and adds the numbers together.



Her answer is an odd number between 4 and 10. Write three possible addition calculations.

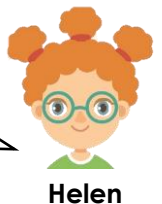
6. Choose the correct numbers to balance the scales.



7. Kamron and Helen have 45 pens. Who is correct? Convince me.



We have an odd amount of pens.



We have an even amount of pens.