
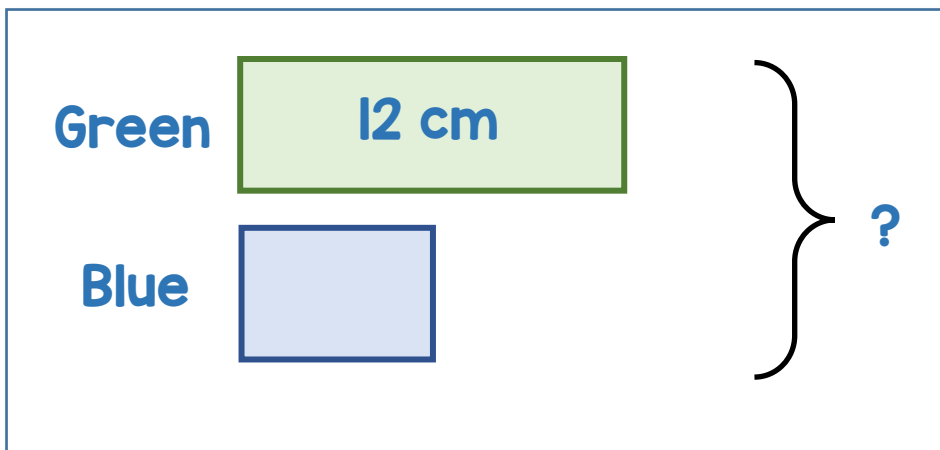


1 Eva has 2 pieces of ribbon.




The green piece is 12 cm long.
The blue piece is half the length of the green.

What is the total length of the pieces of ribbon?



2 Gino bakes 100 pizzas.



He bakes 67 pizzas on Monday.
He bakes the rest of them on Tuesday.

How many more pizzas does he bake on Monday than Tuesday?

