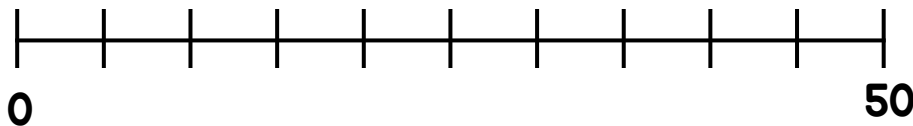
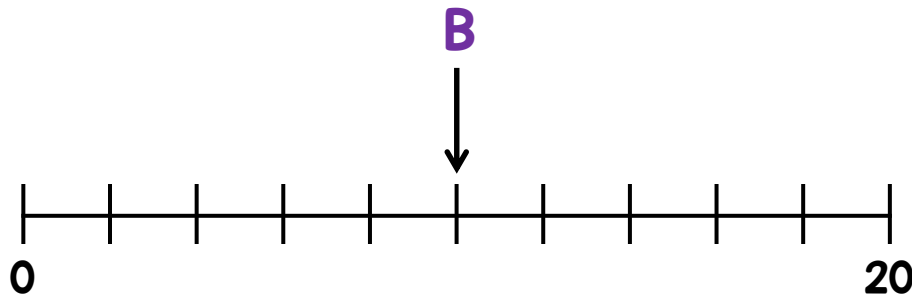
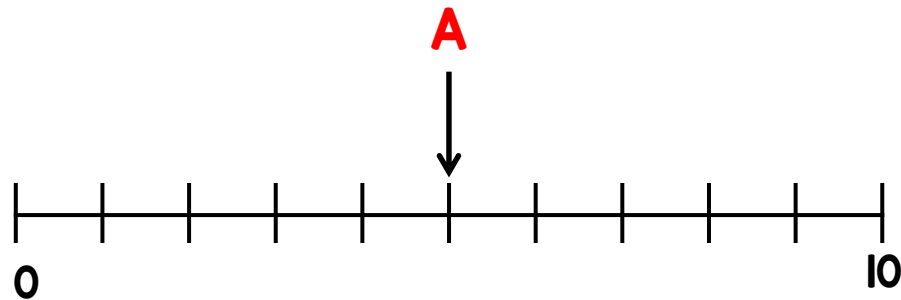



1 Given that  $A + B = C$

Draw an arrow pointing to C



2 Amir has a box of 50 counters.  
12 of the counters are red.  
17 of the counters are blue.  
The rest of the counters are yellow.  
Which coloured counter are there more of?

3

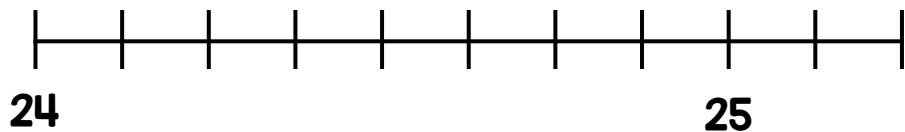
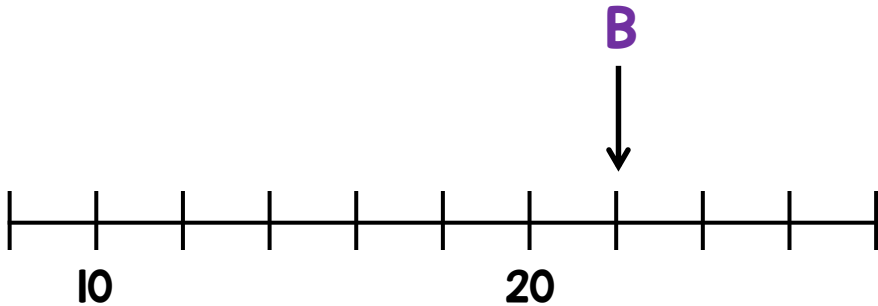
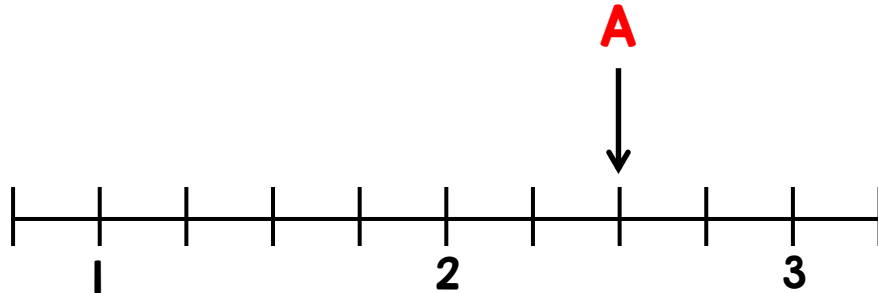


When I share my stickers between me and my 4 friends, we all get 7 stickers.

How many stickers did Lisa share out?

1 Given that  $A + B = C$

Draw an arrow pointing to C



2 George has a box of counters.

- For every 2 red counters there are 5 blue ones.
- George removes 36 blue counters from the box.
- There are now the same amount of red and blue counters.

How many red counters were in the box at the start?

3 Elijah says he divided 32 by a number and got 64

Is this possible?